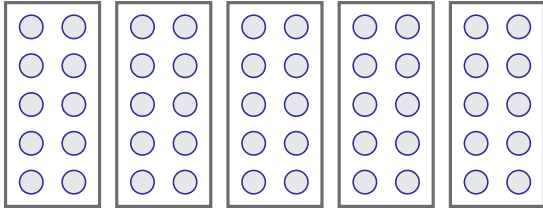


# Groups of tens

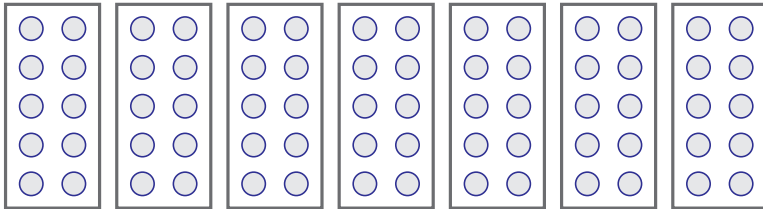
Count the groups of ten and then circle the number



\_\_\_\_\_ groups of 10

55      60      50

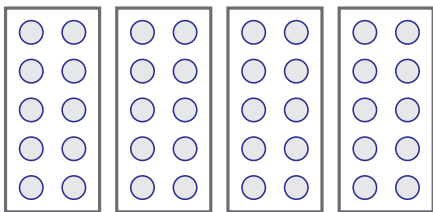
---



\_\_\_\_\_ groups of 10

60      70      80

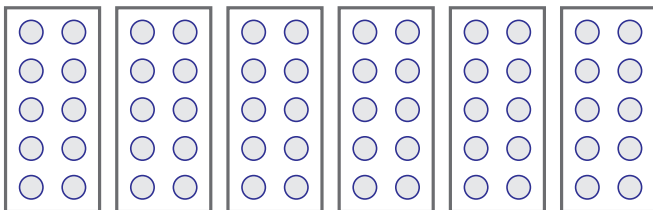
---



\_\_\_\_\_ groups of 10

30      14      40

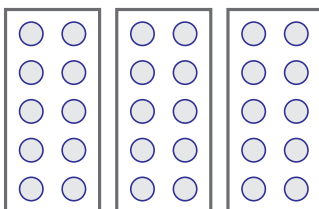
---



\_\_\_\_\_ groups of 10

60      16      26

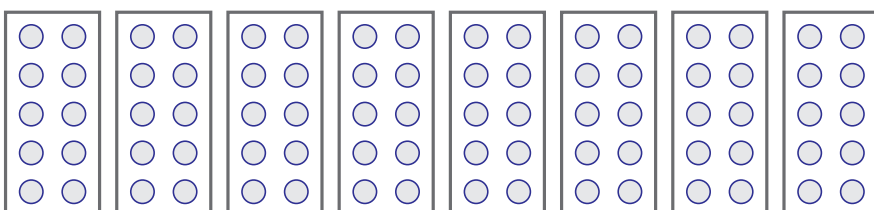
---



\_\_\_\_\_ groups of 10

20      13      30

---

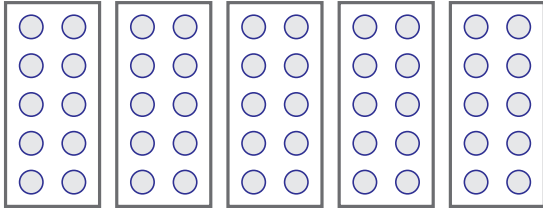


\_\_\_\_\_ groups of 10

60      80      70

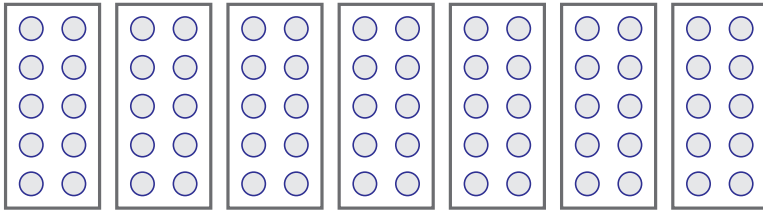
## Groups of tens

Count the groups of ten and then circle the number



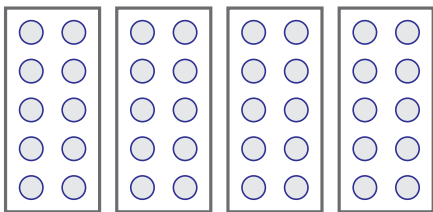
5 groups of 10

55      60      (50)



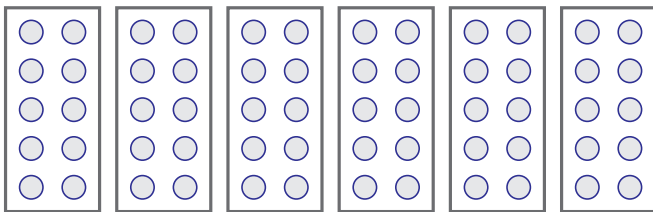
7 groups of 10

60      (70)      80



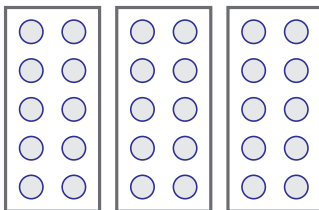
4 groups of 10

30      14      (40)



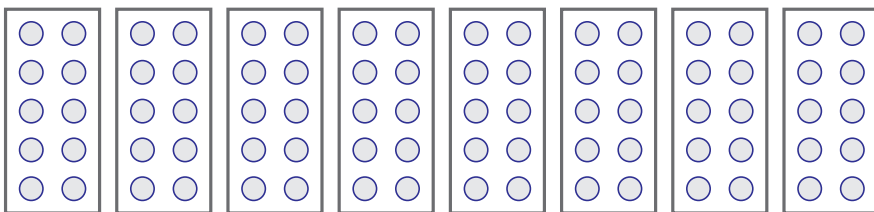
6 groups of 10

(60)      16      26



3 groups of 10

20      13      (30)



8 groups of 10

60      (80)      70