


Subtract Time

Name: _____ Class: _____

Read the clocks and answer the questions




What time is it on the clock?

What time was it 1 hour ago?

What time was it 2 hours ago?

What time was it 5 hours ago?




What time is it on the clock?

What time was it 1 hour ago?

What time was it 2 hours ago?

What time was it 6 hours ago?




What time is it on the clock?

What time was it 30 minutes ago?

What time was it 2 hours ago?

What time was it 12 hours ago?



What time is it on the clock?


What time was it 1 hour ago?

What time was it 30 minutes ago?

What time was it 10 hours ago?

Answers

Read the clocks and answer the questions



What time is it on the clock?

3 o'clock

What time was it 1 hour ago?


2 o'clock

What time was it 2 hours ago?

1 o'clock

What time was it 5 hours ago?

10 o'clock



What time is it on the clock?

5 o'clock

What time was it 1 hour ago?


4 o'clock

What time was it 2 hours ago?

3 o'clock

What time was it 6 hours ago?

11 o'clock



What time is it on the clock?

3:30

What time was it 30 minutes ago?


3 o'clock

What time was it 2 hours ago?

1:30

What time was it 12 hours ago?

3:30



What time is it on the clock?

10:30

What time was it 1 hour ago?

9:30

What time was it 30 minutes ago?

10 o'clock

What time was it 10 hours ago?

12:30