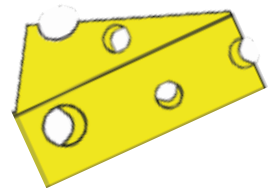


Cheese Lover

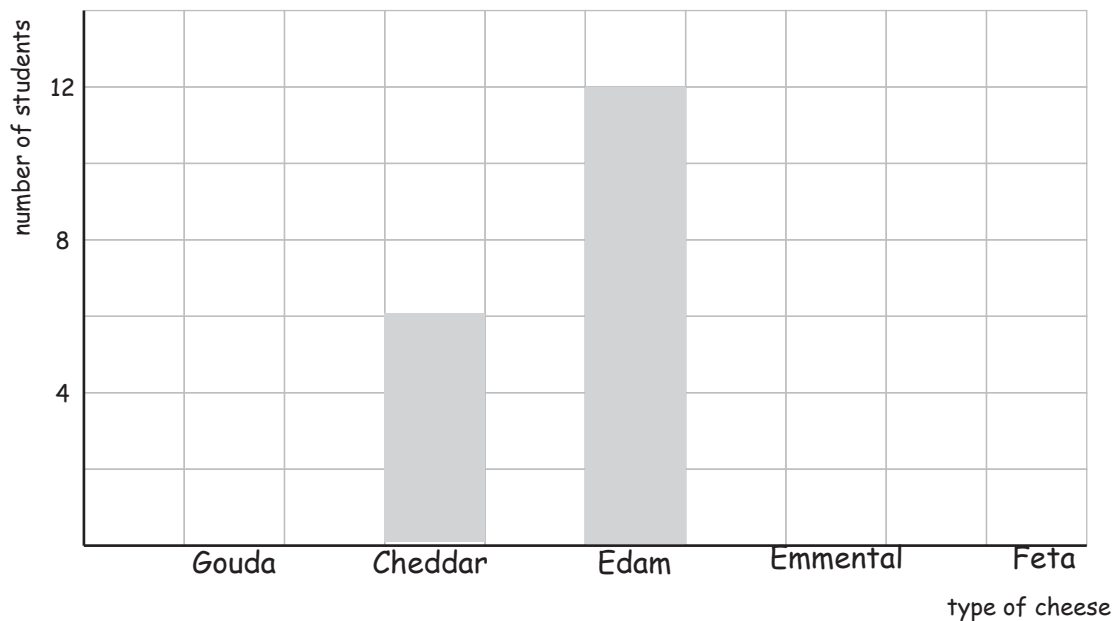
Name: _____ Score: _____

The teacher asked his students about their favorite cheese. The data table shows the number of students and the cheese they like most. Use it to answer the questions.

Gouda	Cheddar	Edam	Emmental	Feta
10	?	?	4	10



1) Complete the bar graph.

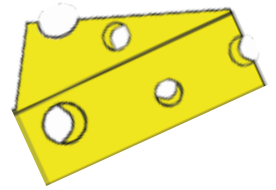


- 2) How many students like Cheddar cheese the best?
- 3) How many students like Edam cheese the most?
- 4) How many more students prefer Feta than Emmental cheese?
- 5) How many students do not like Gouda the most?
- 6) How many students answered the teacher about their favorite cheese?

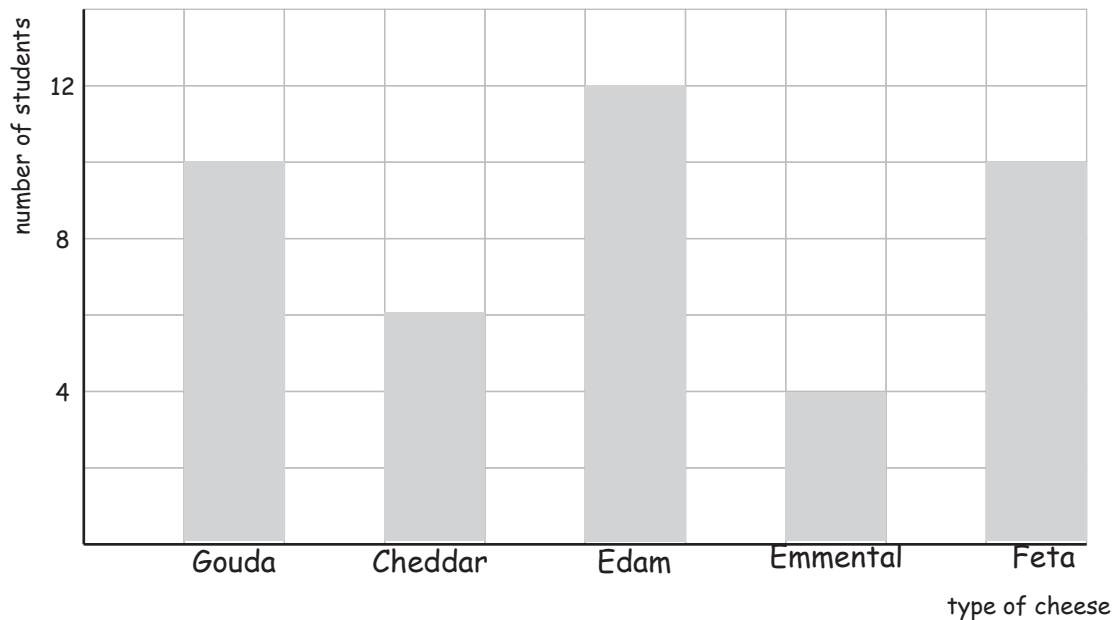
Answers

The teacher asked his students about their favorite cheese. The data table shows the number of students and the cheese they like most. Use it to answer the questions.

Gouda	Cheddar	Edam	Emmental	Feta
10	?	?	4	10



- 1) Complete the bar graph.



- 2) How many students like Cheddar cheese the best?
6 students
- 3) How many students like Edam cheese the most?
12 students
- 4) How many more students prefer Feta than Emmental cheese?
6 students
- 5) How many students do not like Gouda the most?
32 students
- 6) How many students answered the teacher about their favorite cheese?
42 students