


# Telling time to the nearest 5 minutes


Circle the correct time shown on each clock



9 : 45

9 : 55

9 : 35



4 : 50

4 : 45


4 : 55



10 : 25

10 : 30

10 : 20



3 : 30

3 : 35


3 : 40



11 : 05

11 : 10


11 : 15



8 : 45

8 : 55


8 : 50



7 : 20

7 : 15


7 : 25



2 : 25

2 : 20


2 : 15



6 : 45

6 : 35

6 : 40




10 : 10

10 : 15

10 : 05

# Telling time to the nearest 5 minutes


Circle the correct time shown on each clock



9 : 45

9 : 55

9 : 35



4 : 50

4 : 45


4 : 55



10 : 25

10 : 30

10 : 20



3 : 30

3 : 35


3 : 40



11 : 05

11 : 10

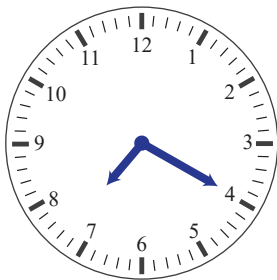
11 : 15



8 : 45

8 : 55


8 : 50



7 : 20

7 : 15

7 : 25



2 : 25

2 : 20


2 : 15



6 : 45

6 : 35

6 : 40



10 : 10

10 : 15

10 : 05