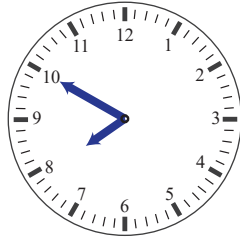


Adding 5 minutes to the clocks


Add 5 minutes to the next clock in each row. Fill in the time and draw the missing hands,




7 : 45



:



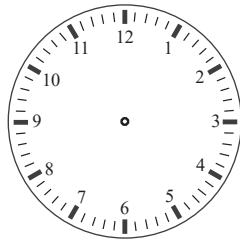
:




:




12 : 50



:



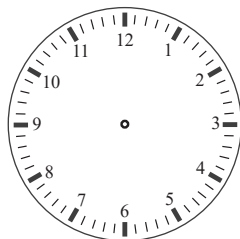
:




:



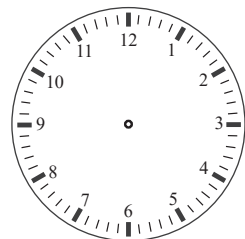
7 : 05




:



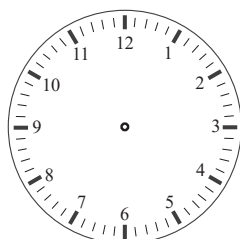
:



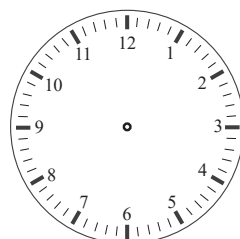
:



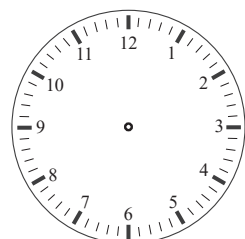
8 : 55



:



:



:

Adding 5 minutes to the clocks

Add 5 minutes to the next clock in each row. Fill in the time and draw the missing hands,




7 : 45



7 : 50



7 : 55




8 : 00



12 : 50




12 : 55



1 : 00



1 : 05




7 : 05




7 : 10




7 : 15



7 : 20



8 : 55



9 : 00



9 : 05



9 : 10