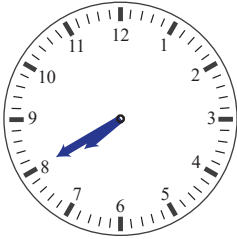


## Adding 10 minutes to the clocks


Add 10 minutes to the next clock in each row. Fill in the time and draw the missing hands.




7 : 40



:



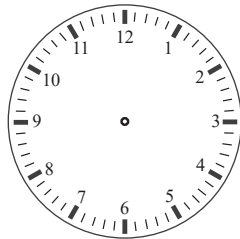
:



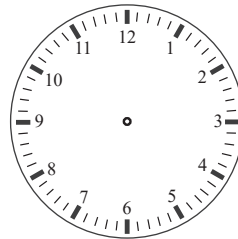
:



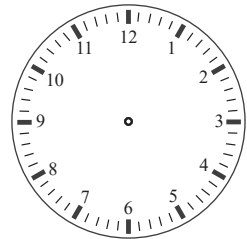
12 : 50



:



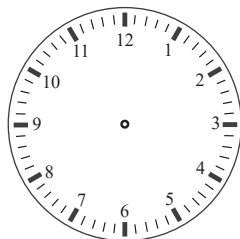
:



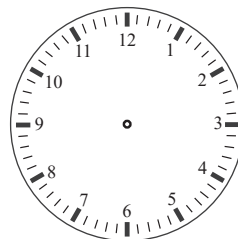
:



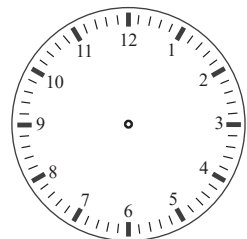
7 : 05




:



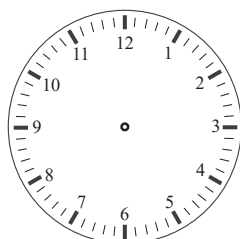
:



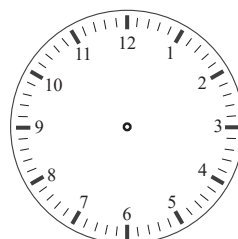
:



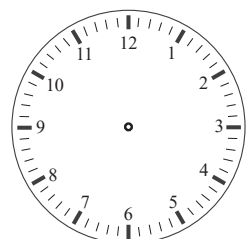
8 : 15



:



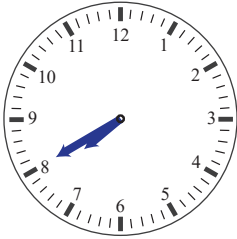
:



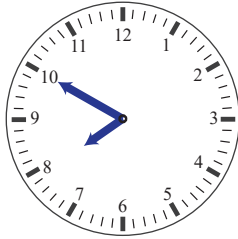
:

## Adding 10 minutes to the clocks


Add 10 minutes to the next clock in each row. Fill in the time and draw the missing hands.



7 : 40



7 : 50



8 : 00




8 : 10




12 : 50



1 : 00



1 : 10



1 : 20




7 : 05




7 : 15



7 : 25




7 : 35




8 : 15



8 : 25



8 : 35



8 : 45