

Telling time to the nearest 15 minutes


Circle the correct time shown on each clock



9 : 15

10 : 15


11 : 15



4 : 15

5 : 45


3 : 30



12 : 15

11 : 15


10 : 45



10 : 30

9 : 30


8 : 30



11 : 45

12 : 30


11 : 15



7 : 45

7 : 15


6 : 30



7 : 45

6 : 45


8 : 15



1 : 15

2 : 15


1 : 45



6 : 15

8 : 30

7 : 15



10 : 30

10 : 15

10 : 45

Telling time to the nearest 15 minutes


Circle the correct time shown on each clock



9 : 15

10 : 15


11 : 15



4 : 15

5 : 45


3 : 30



12 : 15

11 : 15


10 : 45



10 : 30

9 : 30


8 : 30



11 : 45

12 : 30

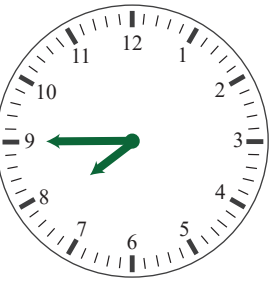
11 : 15



7 : 45

7 : 15


6 : 30



7 : 45

6 : 45


8 : 15



1 : 15

2 : 15

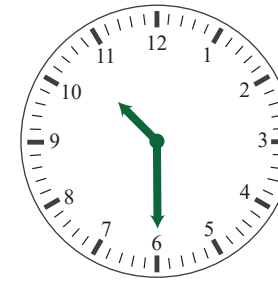
1 : 45



6 : 15

8 : 30

7 : 15



10 : 30

10 : 15

10 : 45