


Coin Division by 2 or 3

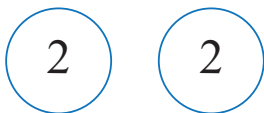
Complete the division sentences (divide by 2 or 3)



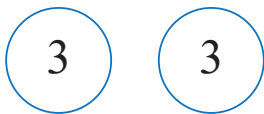
$$8 \div 2 = 4$$



$$15 \div 3 = \square$$



$$\square \div 2 = 2$$



$$\square \div 3 = 2$$




$$9 \div \square = 3$$



$$10 \div 2 = \square$$



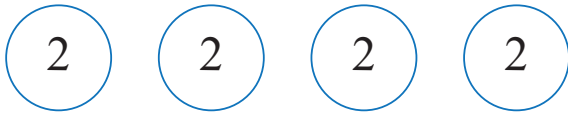
$$\square \div 2 = 3$$



$$\square \div 3 = \square$$

Coin Division by 2 or 3

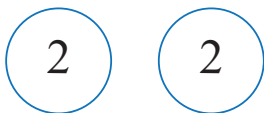
Complete the division sentences (divide by 2 or 3)




$$8 \div 2 = 4$$



$$15 \div 3 = 5$$



$$4 \div 2 = 2$$



$$6 \div 3 = 2$$




$$9 \div 3 = 3$$



$$10 \div 2 = 5$$



$$6 \div 2 = 3$$



$$12 \div 3 = 4$$