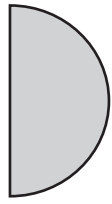
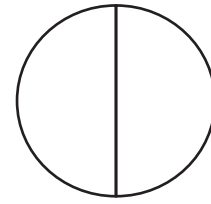


Fractions of a Whole

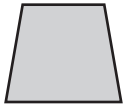
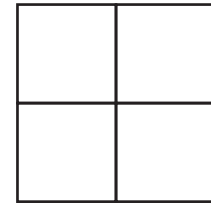
What fraction of a whole do the shaded parts form ?



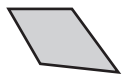
is $\frac{1}{2}$ of this whole



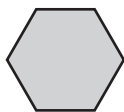
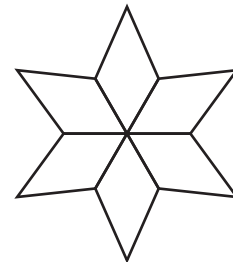
is $\frac{2}{2}$ of this whole



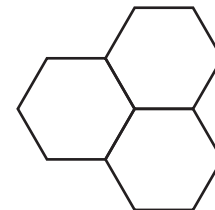
is $\frac{1}{3}$ of this whole



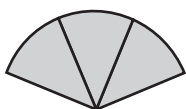
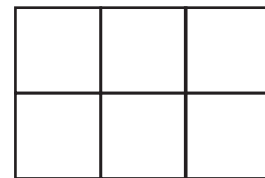
is $\frac{1}{4}$ of this whole



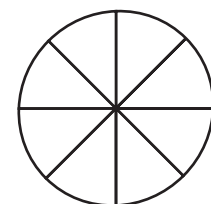
is $\frac{1}{3}$ of this whole



is $\frac{2}{2}$ of this whole

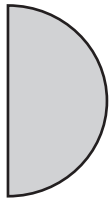


is $\frac{2}{8}$ of this whole

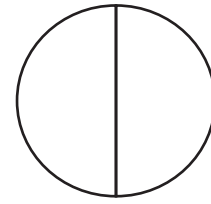


Fractions of a Whole

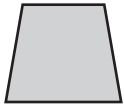
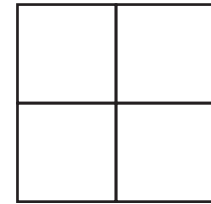
What fraction of a whole do the shaded parts form ?



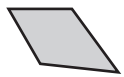
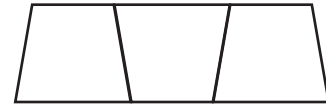
is $\frac{1}{2}$ of this whole



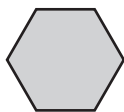
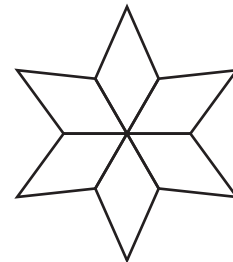
is $\frac{2}{4}$ of this whole



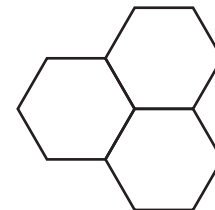
is $\frac{1}{3}$ of this whole



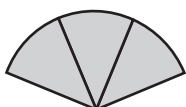
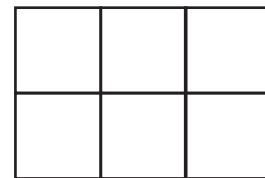
is $\frac{1}{6}$ of this whole



is $\frac{1}{3}$ of this whole



is $\frac{2}{6}$ of this whole



is $\frac{3}{8}$ of this whole

