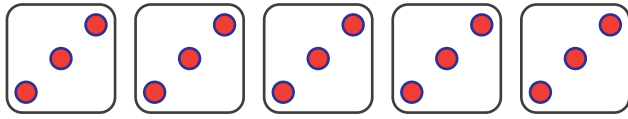
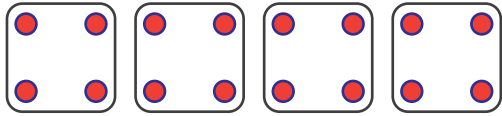


## Dice Division by 3 or 4

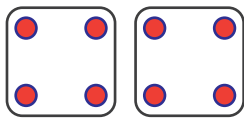
Complete the division sentences (divide by 3 or 4)



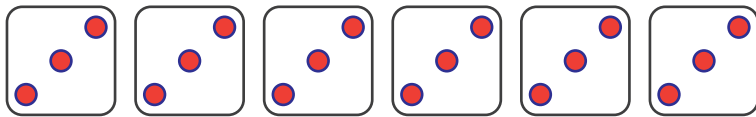
$$15 \div 3 = \square$$



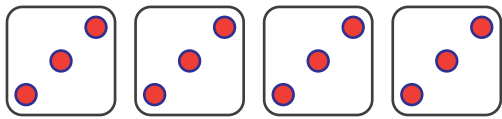
$$16 \div \square = 4$$



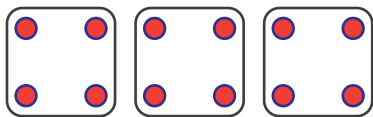
$$8 \div 4 = \square$$



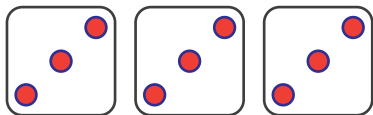
$$18 \div \square = 6$$



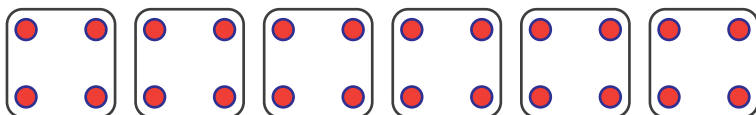
$$\square \div 3 = 4$$



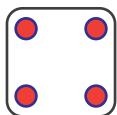
$$\square \div 4 = 3$$



$$\square \div 3 = \square$$



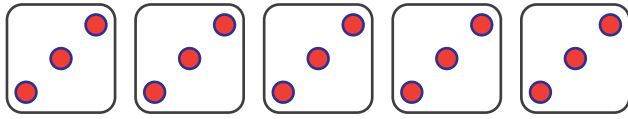
$$\square \div 4 = \square$$



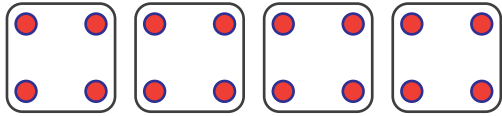
$$4 \div \square = 1$$

## Dice Division by 3 or 4

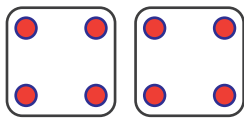
Complete the division sentences (divide by 3 or 4)



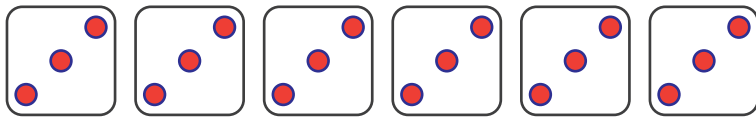
$$15 \div 3 = 5$$



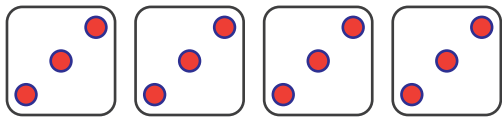
$$16 \div 4 = 4$$



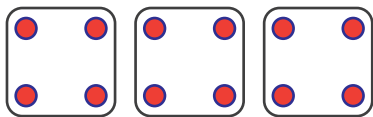
$$8 \div 4 = 2$$



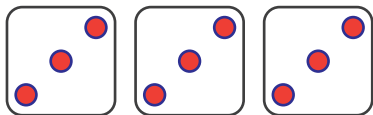
$$18 \div 3 = 6$$



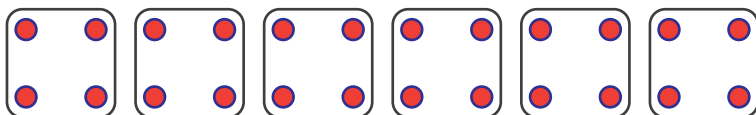
$$12 \div 3 = 4$$



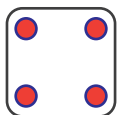
$$12 \div 4 = 3$$



$$9 \div 3 = 3$$



$$24 \div 4 = 6$$



$$4 \div 4 = 1$$