


Coin Division by 5 or 10


Complete the division sentences (divide by 5 or 10)



$$20 \div 5 = \square$$



$$50 \div 10 = \square$$



$$\square \div 5 = 2$$



$$\square \div 10 = 2$$



$$30 \div \square = 3$$



$$25 \div 5 = \square$$




$$\square \div 5 = 3$$



$$\square \div 10 = \square$$

Coin Division by 5 or 10

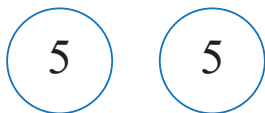
Complete the division sentences (divide by 5 or 10)



$$20 \div 5 = 4$$



$$50 \div 10 = 5$$



$$10 \div 5 = 2$$



$$20 \div 10 = 2$$



$$30 \div 10 = 3$$



$$25 \div 5 = 5$$



$$15 \div 5 = 3$$



$$40 \div 10 = 4$$