


# Dice Division by 6 or 7


Complete the division sentences (divide by 6 or 7)



$$30 \div 6 = \square$$



$$28 \div \square = 4$$



$$14 \div 7 = \square$$



$$36 \div \square = 6$$




$$\square \div 6 = 4$$



$$\square \div 7 = 3$$



$$\square \div 6 = 3$$



$$\square \div 7 = 6$$




$$7 \div \square = 1$$

# Dice Division by 6 or 7


Complete the division sentences (divide by 6 or 7)



$$30 \div 6 = 5$$



$$28 \div 7 = 4$$



$$14 \div 7 = 2$$



$$36 \div 6 = 6$$




$$24 \div 6 = 4$$



$$21 \div 7 = 3$$



$$18 \div 6 = 3$$



$$42 \div 7 = 6$$



$$7 \div 7 = 1$$