
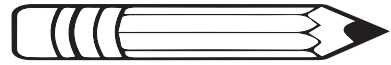

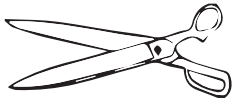


Length of things

Measure the length of the things and shade the correct answers.



How long are the scissors ?

4 cm

3 cm

Is the bicycle longer than the car ?

yes

no

How much shorter is the cake than the bicycle ?

2 cm

3 cm

How long is the pencil ?

5 cm

6 cm

How long are the car and bicycle altogether ?

14 cm

15 cm

Is the cake 1 centimeter longer than the scissors ?

yes

no





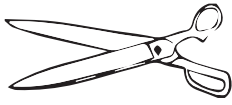
How much longer is the car than the cake ?

4 cm

5 cm

Length of things

Measure the length of the things and shade the correct answers.



How long are the scissors ?

4 cm

3 cm

Is the bicycle longer than the car ?

yes

no

How much shorter is the cake than the bicycle ?

2 cm

3 cm

How long is the pencil ?

5 cm

6 cm

How long are the car and bicycle altogether ?

14 cm

15 cm

Is the cake 1 centimeter longer than the scissors ?

yes

no

How much longer is the car than the cake ?

4 cm

5 cm