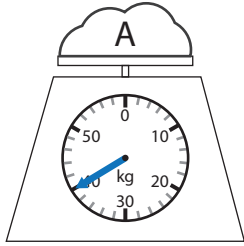
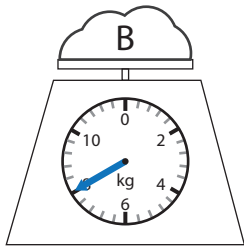


True or false

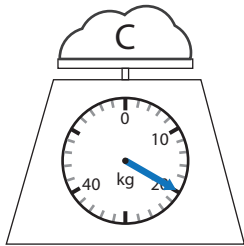
Are the following statements true (T) or false (F)?



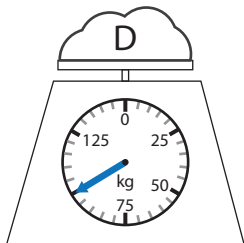
The weight of cloud A is 40 kilograms. T



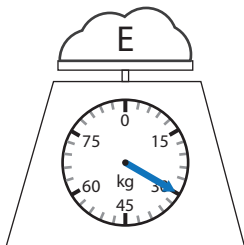
Cloud B weighs less than 6 kilograms.



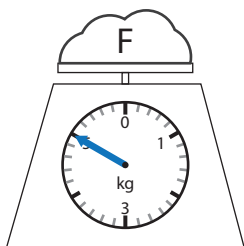
Cloud C weighs between 10 and 30 kilograms.



The weight of cloud D is 100 kilograms.



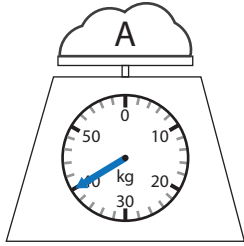
The weight of cloud E is 35 kilograms.



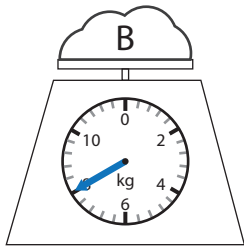
Cloud F weighs more than 4 kilograms.

True or false

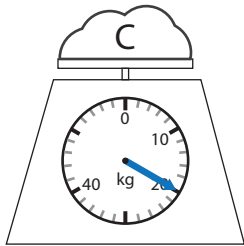
Are the following statements true (T) or false (F)?



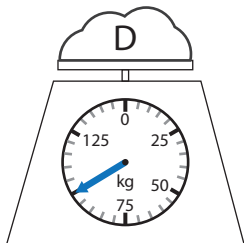
The weight of cloud A is 40 kilograms. T



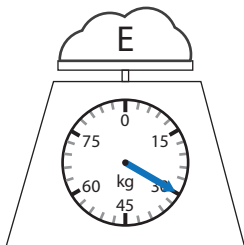
Cloud B weighs less than 6 kilograms. F



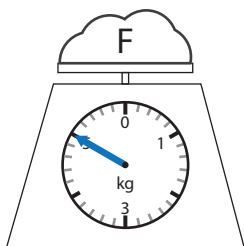
Cloud C weighs between 10 and 30 kilograms. T



The weight of cloud D is 100 kilograms. T



The weight of cloud E is 35 kilograms. F



Cloud F weighs more than 4 kilograms. T