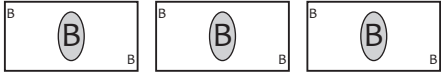
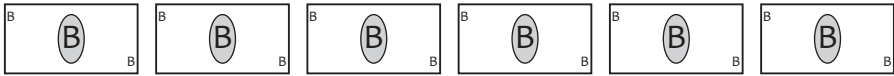
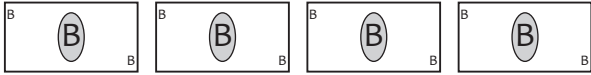
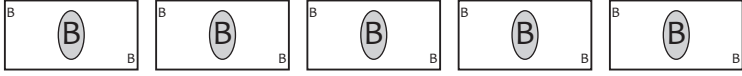


Money pictograph

The pictograph shows the price of some items in a shop in Baht. Use the graph and shade the correct answers.

book		฿ 150
game		
shoes		
calculator		

Each  stands for 50 Baht

What is the price of the book ? ฿ 150 ฿ 200

What is the price of the game ? ฿ 200 ฿ 300

Can you buy the book if you have 100 Baht ? yes no

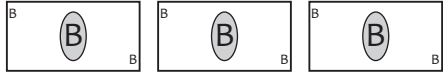
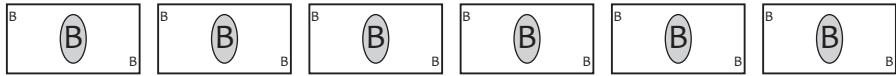
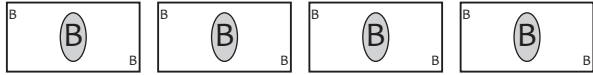

How much more are the shoes than the book ? ฿ 50 ฿ 100

What is the price of the calculator and the book ? ฿ 300 ฿ 400

Can you buy all items with 1,000 Baht ? yes no

Money pictograph

The pictograph shows the price of some items in a shop in Baht. Use the graph and shade the correct answers.

book		฿ 150
game		
shoes		
calculator		

Each  stands for 50 Baht

What is the price of the book ? ฿ 150 ฿ 200

What is the price of the game ? ฿ 200 ฿ 300

Can you buy the book if you have 100 Baht ? yes no

How much more are the shoes than the book ? ฿ 50 ฿ 100

What is the price of the calculator and the book ? ฿ 300 ฿ 400

Can you buy all items with 1,000 Baht ? yes no