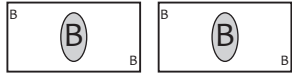
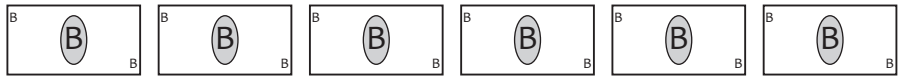
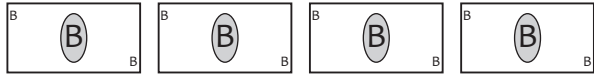



Money pictograph

The pictograph shows the weekly school lunch money of 4 friends. Use the graph and shade the correct answers.

Aida		฿ 200
Wally		
Sim		
Jenny		

Each  stands for 100 Baht

How much does Aida get per week ? ฿ 200 ฿ 100

How about Wally ? ฿ 600 ฿ 500

Does Jenny get the most lunch money ? yes no

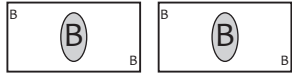
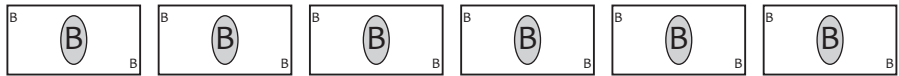
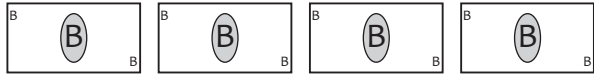

How much more does Sim get than Aida ? ฿ 300 ฿ 200

How much does Aida get in 2 weeks ? ฿ 300 ฿ 400

How much do Sim and Jenny get altogether ? ฿ 700 ฿ 600

Money pictograph

The pictograph shows the weekly school lunch money of 4 friends. Use the graph and shade the correct answers.

Aida		฿ 200
Wally		
Sim		
Jenny		

Each  stands for 100 Baht

How much does Aida get per week ? ฿ 200 ฿ 100

How about Wally ? ฿ 600 ฿ 500

Does Jenny get the most lunch money ? yes no

How much more does Sim get than Aida ? ฿ 300 ฿ 200

How much does Aida get in 2 weeks ? ฿ 300 ฿ 400

How much do Sim and Jenny get altogether ? ฿ 700 ฿ 600