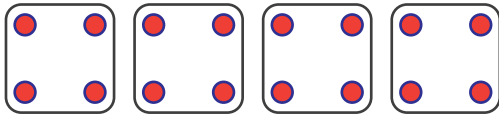
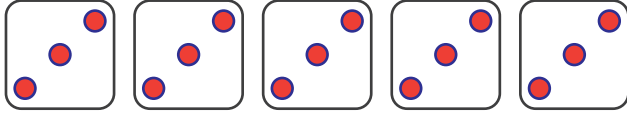


Dice groups

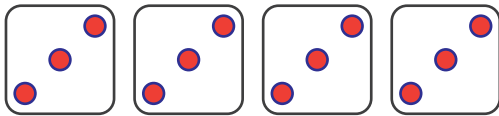
Complete the multiplication sentences



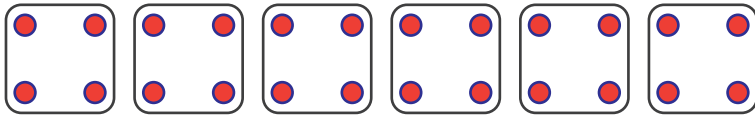
$$4 \times 4 = \square$$




$$\square \times 3 = \square$$




$$4 \times \square = \square$$




$$\square \times \square = 24$$



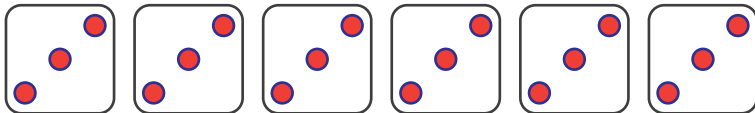
$$5 \times \square = \square$$



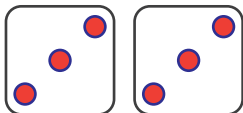
$$\square \times 3 = \square$$



$$\square \times 4 = \square$$



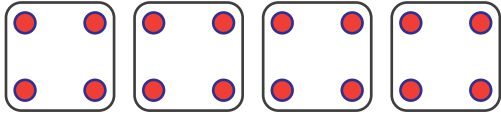
$$\square \times \square = \square$$



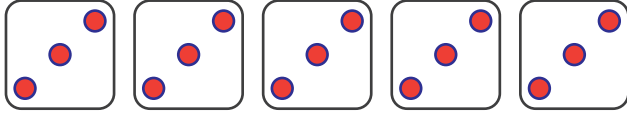
$$\square \times \square = \square$$

Dice groups

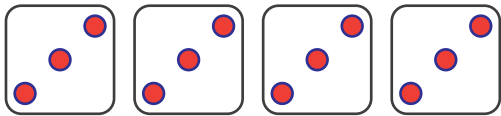
Complete the multiplication sentences



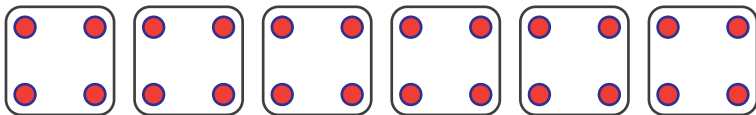
$$4 \times 4 = 16$$



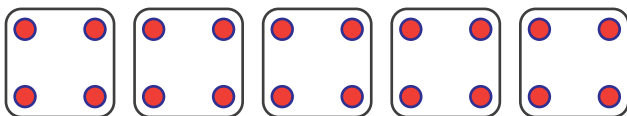
$$5 \times 3 = 15$$



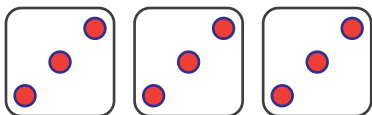
$$4 \times 3 = 12$$



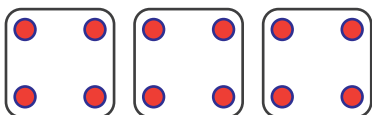
$$6 \times 4 = 24$$



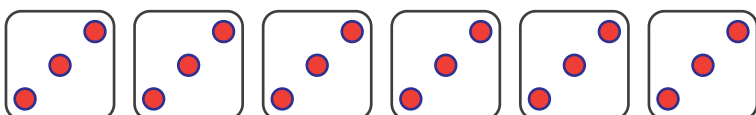
$$5 \times 4 = 20$$



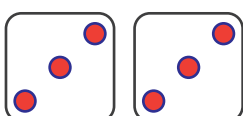
$$3 \times 3 = 9$$



$$3 \times 4 = 12$$



$$6 \times 3 = 18$$



$$2 \times 3 = 6$$