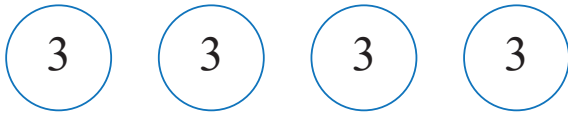


Coin groups

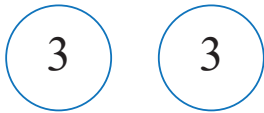
Complete the multiplication sentences



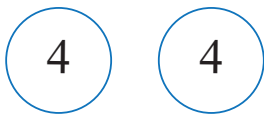
$$\boxed{4} \times \boxed{3} = \boxed{}$$



$$\boxed{} \times \boxed{4} = \boxed{}$$



$$\boxed{2} \times \boxed{} = \boxed{}$$



$$\boxed{} \times \boxed{4} = \boxed{}$$




$$\boxed{3} \times \boxed{} = \boxed{}$$



$$\boxed{} \times \boxed{} = \boxed{15}$$



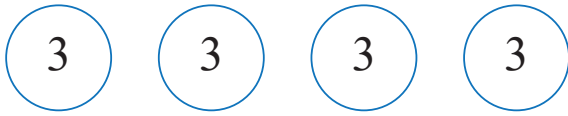
$$\boxed{} \times \boxed{} = \boxed{9}$$



$$\boxed{} \times \boxed{} = \boxed{}$$

Coin groups

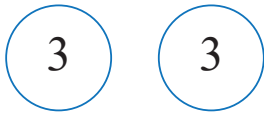
Complete the multiplication sentences



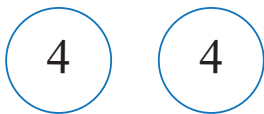
$$4 \times 3 = 12$$



$$5 \times 4 = 20$$



$$2 \times 3 = 6$$



$$2 \times 4 = 8$$




$$3 \times 4 = 12$$



$$5 \times 3 = 15$$



$$3 \times 3 = 9$$



$$4 \times 4 = 16$$