


Card groups


Complete the multiplication sentences




$$4 \times 7 = \square$$



$$\square \times 6 = \square$$



$$4 \times \square = \square$$



$$\square \times \square = 42$$



$$5 \times \square = \square$$



$$\square \times 6 = \square$$



$$\square \times 7 = \square$$




$$6 \times \square = \square$$



$$2 \times \square = \square$$

Card groups


Complete the multiplication sentences




$$4 \times 7 = 28$$



$$5 \times 6 = 30$$



$$4 \times 6 = 24$$



$$6 \times 7 = 42$$



$$5 \times 7 = 35$$



$$3 \times 6 = 18$$



$$3 \times 7 = 21$$



$$6 \times 6 = 36$$



$$2 \times 6 = 12$$