



## Complete the pictograph

The data table below shows the number of cupcakes my grandmother baked in 4 days. Use the data, complete the pictograph and answer the questions.

Monday	Tuesday	Wednesday	Thursday
20 cupcakes	16 cupcakes	24 cupcakes	12 cupcakes

Monday	
Tuesday	
Wednesday	
Thursday	

Each  stands for 4 cupcakes

On which day did my grandmother bake the most cupcakes ?

---

How many more cupcakes were baked on Tuesday than Thursday?

---

How many cupcakes were baked on Monday and Tuesday ?

---


How many cupcakes did she bake altogether ?


---

## Complete the pictograph

The data table below shows the number of cupcakes my grandmother baked in 4 days. Use the data, complete the pictograph and answer the questions.

Monday	Tuesday	Wednesday	Thursday
20 cupcakes	16 cupcakes	24 cupcakes	12 cupcakes



Each  stands for 4 cupcakes

On which day did my grandmother bake the most cupcakes ?

On Wednesday

How many more cupcakes were baked on Tuesday than Thursday?

4 cupcakes

How many cupcakes were baked on Monday and Tuesday ?

36 cupcakes

How many cupcakes did she bake altogether ?

72 cupcakes