






## Reading data tables

Analyze the data table about the number of pets in a pet shop and shade the correct answers.

 dogs	 kittens	 fish	 parrots	 rabbits
25	35	100	45	15

How many parrots are in the pet shop ?

 45 55

How many rabbits are in the pet shop ?

 25 15

How many fish and parrots are in the shop ?

 145 150

How many rabbits, dogs and kittens are there ?

 65 75

How many more fish than dogs are in the shop ?

 75 85

How many fewer kittens than parrots are there ?

 10 20

How many animals that cannot fly are there ?






 170 175

How many animals are there altogether ?

 210 220

## Reading data tables

Analyze the data table about the number of pets in a pet shop and shade the correct answers.

 dogs	 kittens	 fish	 parrots	 rabbits
25	35	100	45	15

How many parrots are in the pet shop ?

 45 55

How many rabbits are in the pet shop ?

 25 15

How many fish and parrots are in the shop ?

 145 150

How many rabbits, dogs and kittens are there ?

 65 75

How many more fish than dogs are in the shop ?

 75 85

How many fewer kittens than parrots are there ?

 10 20

How many animals that cannot fly are there ?

 170 175

How many animals are there altogether ?

 210 220