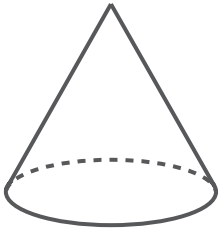


Name the 3D shapes

Circle the correct name of the 3D shape.




clone

cone

circle

triangle

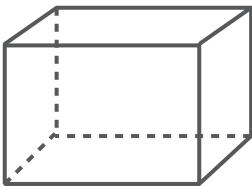


pipe

square

cylinder

circle

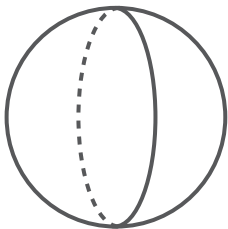


cube

box

android

cuboid

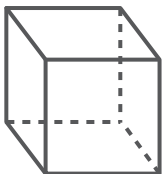


sphere

circle

planet

rectangle

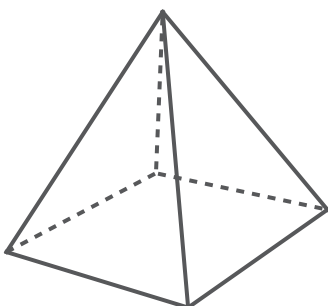


cube

club

square

line



kite

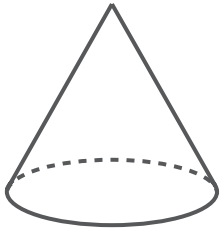
triangle

pyramid

point

Name the 3D shapes

Circle the correct name of the 3D shape.




clone

cone

circle

triangle

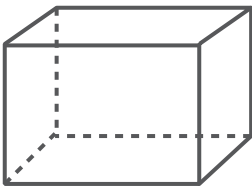


pipe

square

cylinder

circle

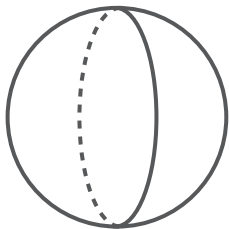


cube

box

android

cuboid

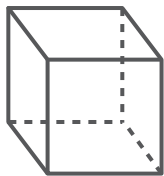


sphere

circle

planet

rectangle

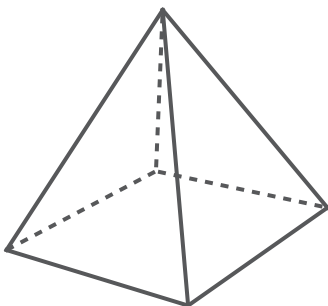


cube

club

square

line



kite

triangle

pyramid

point