

Name the Shapes


Use the word bank and name the shapes

square
triangle (2)


rectangle
circle

semicircle
star

oval
quarter circle

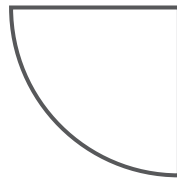


circle




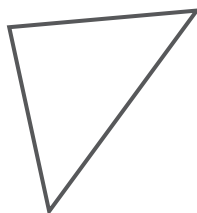


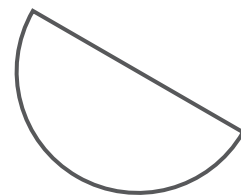












Name the Shapes


Use the word bank and name the shapes

square
triangle (2)


rectangle
circle

semicircle
star

oval
quarter circle



circle



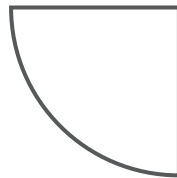
star



square




rectangle



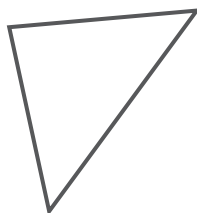
quarter circle



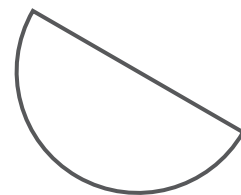
triangle



oval



triangle



semicircle