

# Name the 3D shapes

Name the 3D shapes.

sphere


cylinder (2)

cubes (2)




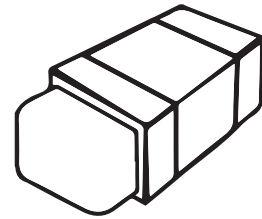

pyramids

cone (2)

cuboid



sphere



Name the 3D shapes

Name the 3D shapes.

sphere


cylinder (2)

cubes (2)


pyramids

cone (2)

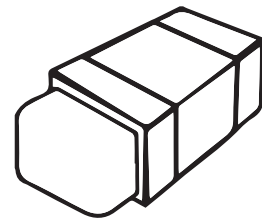
cuboid




sphere



pyramids



cuboid



cube




cylinder



cone



cone



cylinder



cube