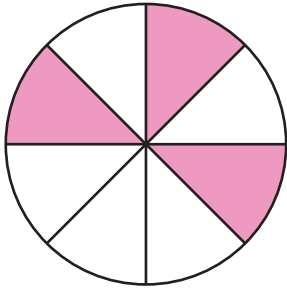


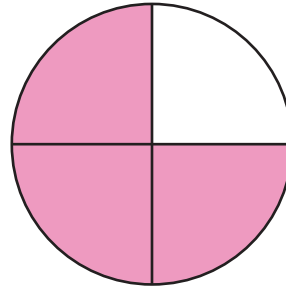
# Shaded and Not Shaded

Name: \_\_\_\_\_ Score: \_\_\_\_\_

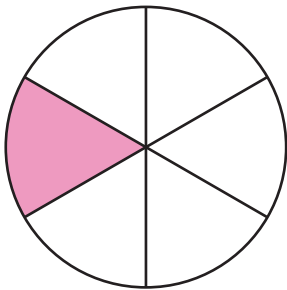
What fractions of the following shapes are shaded and not shaded.



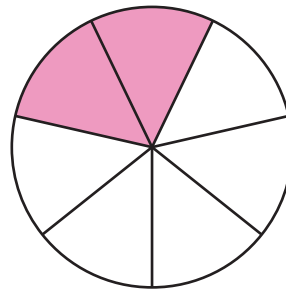
shaded  not shaded



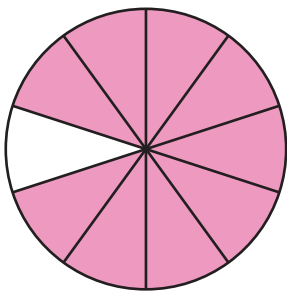
shaded  not shaded



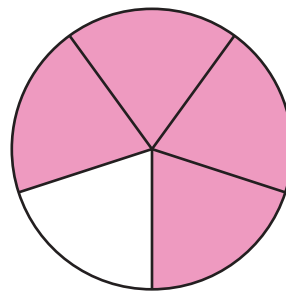
shaded  not shaded



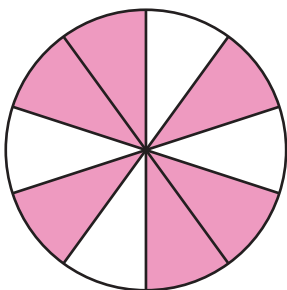
shaded  not shaded



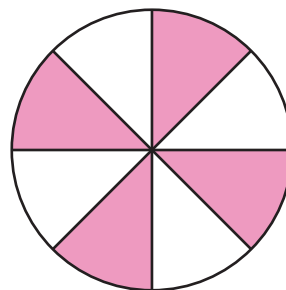
shaded  not shaded



shaded  not shaded



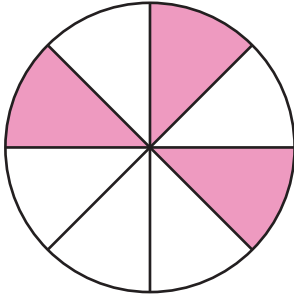
shaded  not shaded



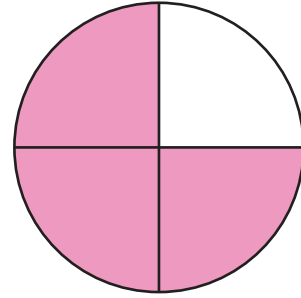
shaded  not shaded

# Answers

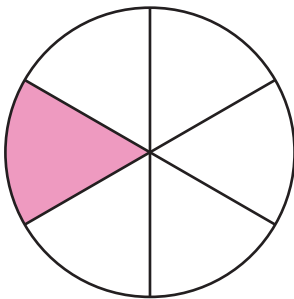
What fractions of the following shapes are shaded and not shaded.



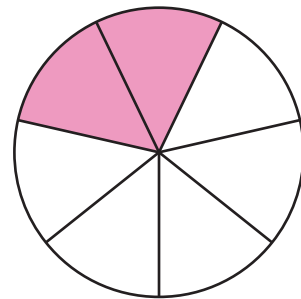
shaded  $\frac{3}{8}$  not shaded  $\frac{5}{8}$



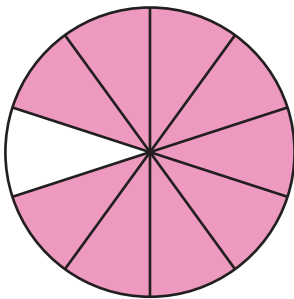
shaded  $\frac{3}{4}$  not shaded  $\frac{1}{4}$



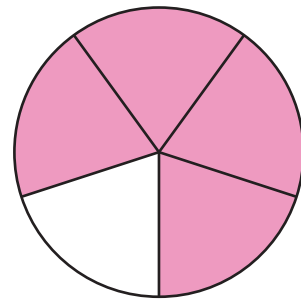
shaded  $\frac{1}{6}$  not shaded  $\frac{5}{6}$



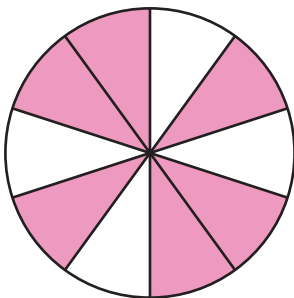
shaded  $\frac{2}{7}$  not shaded  $\frac{5}{7}$



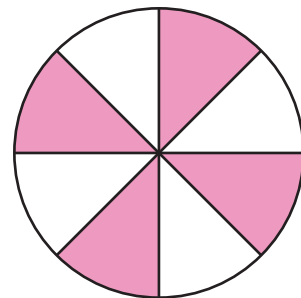
shaded  $\frac{9}{10}$  not shaded  $\frac{1}{10}$



shaded  $\frac{4}{5}$  not shaded  $\frac{1}{5}$



shaded  $\frac{6}{10}$  not shaded  $\frac{4}{10}$



shaded  $\frac{4}{8}$  not shaded  $\frac{4}{8}$