




Picking Strawberries

Name: _____ Score: _____

Aunty Maria grows strawberries and asked us to pick some so that she could make her delicious strawberry jam. The following graph shows the number we picked.




Jenny	
James	
Jack	

Each  stands for 7 strawberries

- 1) How many strawberries did Jack pick ?
- 2) How many strawberries did James and Jenny pick ?
- 3) How many more strawberries did James pick than Jenny ?
- 4) Who picked 21 strawberries more than Jack ?
- 5) How many strawberries did they pick altogether ?
- 6) If Aunty Maria needs 90 strawberries to make just 1 pot of jam, how many pots of strawberry jam could she make ?

Answers

Aunty Maria grows strawberries and asked us to pick some so that she could make her delicious strawberry jam. The following graph shows the number we picked.

Jenny	
James	
Jack	

Each  stands for 7 strawberries

- 1) How many strawberries did Jack pick ?
28 strawberries
- 2) How many strawberries did James and Jenny pick ?
84 strawberries
- 3) How many more strawberries did James pick than Jenny ?
14 strawberries
- 4) Who picked 21 strawberries more than Jack ?
James
- 5) How many strawberries did they pick altogether ?
112 strawberries
- 6) If Aunty Maria needs 90 strawberries to make just 1 pot of jam, how many pots of strawberry jam could she make ?
1 pot of strawberry jam