


# Adding and Subtracting Time

Name: \_\_\_\_\_ Class: \_\_\_\_\_

Read the clocks and add and subtract time.




What time is it on the clock? \_\_\_\_\_

What time will it be in 20 minutes? \_\_\_\_\_

What time will it be in 2 hours? \_\_\_\_\_

What time was it 25 minutes ago? \_\_\_\_\_




What time is it on the clock? \_\_\_\_\_

What time will it be in 50 minutes? \_\_\_\_\_

What time will it be in 3 hours? \_\_\_\_\_

What time was it 15 minutes ago? \_\_\_\_\_




What time is it on the clock? \_\_\_\_\_

What time will it be in 20 minutes? \_\_\_\_\_

What time will it be in 2 hours? \_\_\_\_\_

What time was it 20 minutes ago? \_\_\_\_\_



What time is it on the clock? \_\_\_\_\_


What time will it be in 25 minutes? \_\_\_\_\_

What time will it be in 2 hours? \_\_\_\_\_

What time was it 20 minutes ago? \_\_\_\_\_

# Answers

Read the clocks and add and subtract time.



What time is it on the clock?

3.00

What time will it be in 20 minutes?


3.20

What time will it be in 2 hours?

5.00

What time was it 25 minutes ago?

2.35



What time is it on the clock?

1.10

What time will it be in 50 minutes?


2.00

What time will it be in 3 hours?

4.10

What time was it 15 minutes ago?

12.55



What time is it on the clock?

8.40

What time will it be in 20 minutes?


9.00

What time will it be in 2 hours?

10.40

What time was it 20 minutes ago?

8.20



What time is it on the clock?

11.05

What time will it be in 25 minutes?

11.30

What time will it be in 2 hours?

1.05

What time was it 20 minutes ago?

10.45