

# Capacity of Containers

Name: \_\_\_\_\_ Class: \_\_\_\_\_


Look at capacity of the following containers and color for each statement the correct number.




bathtub 20 ℓ



bottle 1ℓ



jug 3 ℓ



fish bowl 10ℓ

- The bathtub can hold 

20	10
----	----

 liters of water.
- The capacity of the fish bowl is 

15	10
----	----

 liters.
- The jug can hold 

3	2
---	---

 liters of water more than the bottle.
- The bathtub can hold 

2	10
---	----

 times more water than the fish bowl.
- The capacity of the bathtub and 3 jugs is 

23	29
----	----

 liters.
- The capacity of the fishbowl and 4 bottles is 

14	13
----	----

 liters.
- The bottle can hold 

2	3
---	---


 times less water than the jug
- The capacity of the 4 containers altogether is 

34	24
----	----

 liters.

# Answers


Look at capacity of the following containers and color for each statement the correct number.




bathtub 20 ℓ



bottle 1ℓ



jug 3 ℓ



fish bowl 10ℓ

1. The bathtub can hold 

20	10
----	----

 liters of water.
2. The capacity of the fish bowl is 

15	10
----	----

 liters.
3. The jug can hold 

3	2
---	---

 liters of water more than the bottle.
4. The bathtub can hold 

2	10
---	----

 times more water than the fish bowl.
5. The capacity of the bathtub and 3 jugs is 

23	29
----	----

 liters.
6. The capacity of the fishbowl and 4 bottles is 

14	13
----	----

 liters.
7. The bottle can hold 

2	3
---	---

 times less water than the jug
8. The capacity of the 4 containers altogether is 

34	24
----	----

 liters.