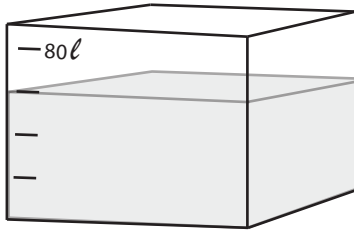


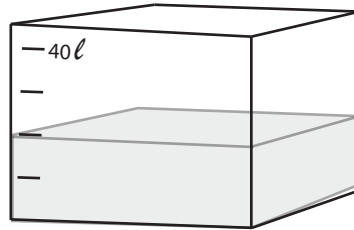
Capacity of Fish Tanks

Name: _____ Class: _____

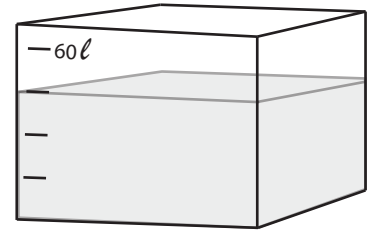
Look at capacity of the following fish tanks and color for each statement the correct number.



Fish Tank A



Fish Tank B



Fish Tank C

1. Fish tank A holds

70	60
----	----

 liters of water.
2. The volume of fish tank B is

20	10
----	----

 liters of water.
3. Fish tank C holds

50	45
----	----

 liters of water.
4. Fish tank C holds

20	25
----	----

 liters of water more than fish tank B.
5. Fish tank A holds

30	40
----	----

 liters of water more than fish tank B.
6. The difference in volume of water between B and C is

15	25
----	----

 liters.
7. Fish tank A and B hold

80	85
----	----

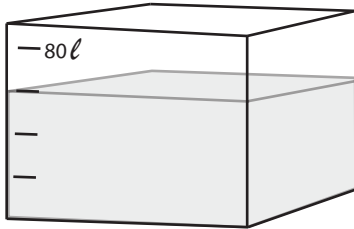
 liters of water altogether.
8. Fish tank A, B and C hold

125	140
-----	-----

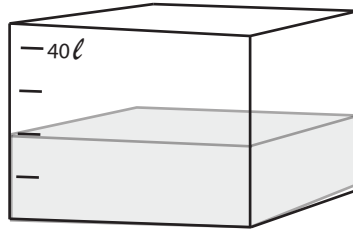
 liters of water altogether.

Answers

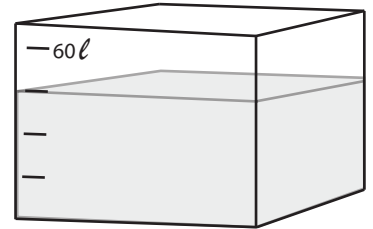
Look at capacity of the following fish tanks and color for each statement the correct number.



Fish Tank A



Fish Tank B



Fish Tank C

1. Fish tank A holds liters of water.
2. The volume of fish tank B is liters of water.
3. Fish tank C holds liters of water.
4. Fish tank C holds liters of water more than fish tank B.
5. Fish tank A holds liters of water more than fish tank B.
6. The difference in volume of water between B and C is liters.
7. Fish tank A and B hold liters of water altogether.
8. Fish tank A, B and C hold liters of water altogether.