

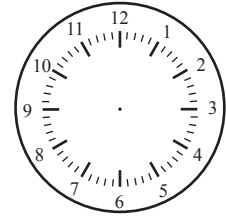
Later/Earlier

Name: _____ Class: _____

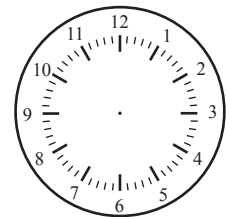
Read the clock on the left, follow the instruction and draw the hands on the clock on the right side.




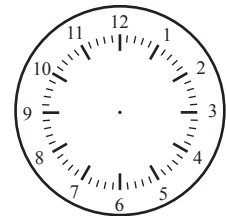
10 minutes later



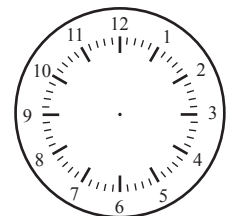
70 minutes earlier



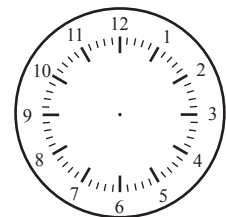
15 minutes later



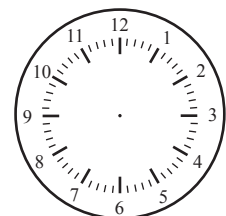
40 minutes earlier



55 minutes later



30 minutes earlier




Answers

Read the clock on the left, follow the instruction and draw the hands on the clock on the right side.




10 minutes later



5:00




70 minutes earlier




6:00



15 minutes later



6:45




40 minutes earlier



11:15



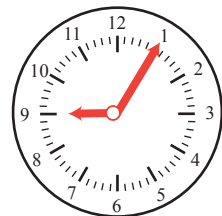
55 minutes later



9:00



30 minutes earlier



9:05