


Measuring Length

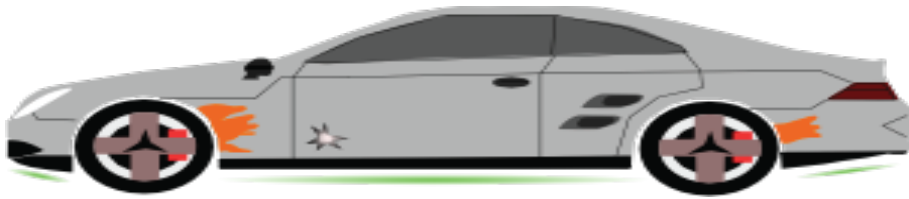
Name: _____ Class: _____

Use your ruler and measure the length of the following cars. Round your answer off to the nearest centimeter. Write your answer in the box.



Answers


Use your ruler and measure the length of the following cars. Round your answer off to the nearest centimeter. Write your answer in the box.



12 cm



11 cm



6 cm



9 cm



7 cm