
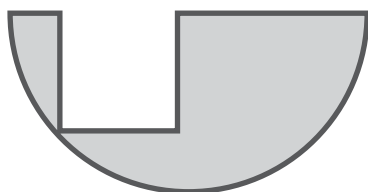
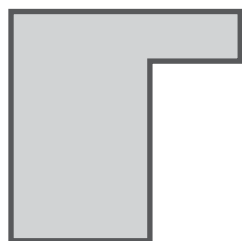


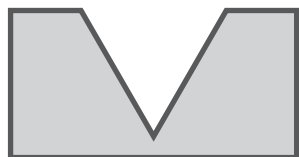


# Missing Parts

Name: \_\_\_\_\_ Class: \_\_\_\_\_

There is a part missing from each shape. Match the shape with the correct missing parts.



# Answers

