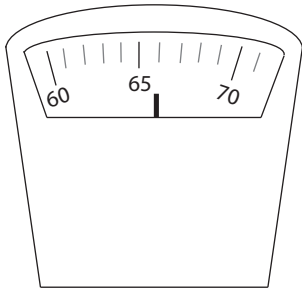


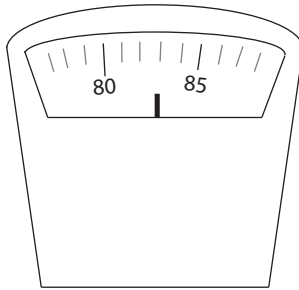
Weighing Scales

Name: _____ Class: _____

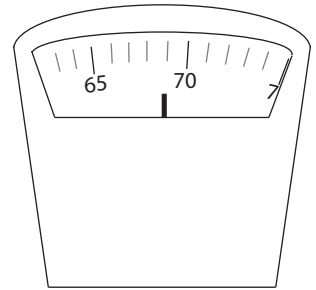
Read the following weighing scales and fill in the blanks



Mary



John

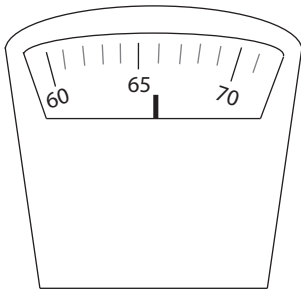


Erik

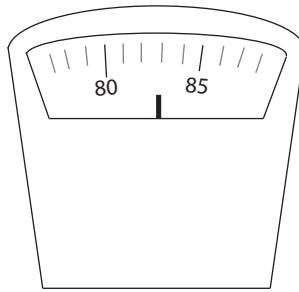
- Mary weighs kilograms.
- John's mass is kilograms.
- Erik weighs kilograms
- Erik is kilograms lighter than John.
- Erik is kilograms heavier than Mary.
- is the heaviest.
- is the not the lightest and not the heaviest.
- The difference in mass between John and Mary is kilograms.
- The total mass of Erik, Mary and John is kilograms

Answers

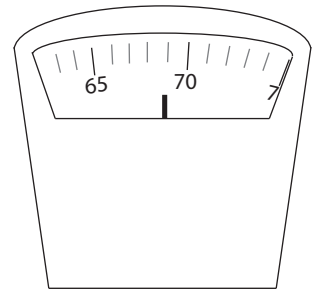
Read the following weighing scales and fill in the blanks



Mary



John



Erik

1. Mary weighs **66** kilograms.
2. John's mass is **83** kilograms.
3. Erik weighs **69** kilograms
4. Erik is **14** kilograms lighter than John.
5. Erik is **3** kilograms heavier than Mary.
6. **John** is the heaviest.
7. **Erik** is the not the lightest and not the heaviest.
8. The difference in mass between John and Mary is **17** kilograms.
9. The total mass of Erik, Mary and John is **218** kilograms