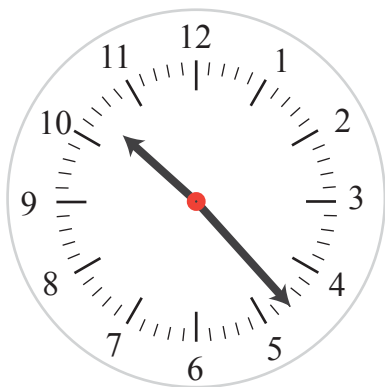


# Adding Minutes

Name: \_\_\_\_\_ Class: \_\_\_\_\_

Read the clocks and add or subtract time.

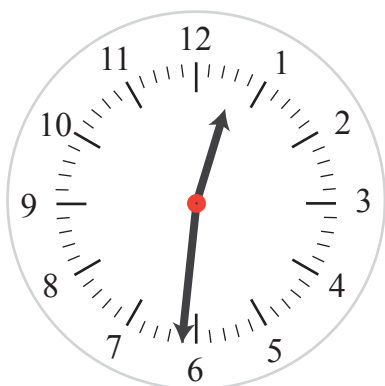


What time is it on the clock? \_\_\_\_\_

What time will it be in 55 minutes? \_\_\_\_\_

What time will it be in 100 minutes? \_\_\_\_\_

What time was it 50 minutes ago? \_\_\_\_\_



What time is it on the clock? \_\_\_\_\_

What time will it be in 90 minutes? \_\_\_\_\_

What time will it be in 125 minutes? \_\_\_\_\_

What time was it 70 minutes ago? \_\_\_\_\_

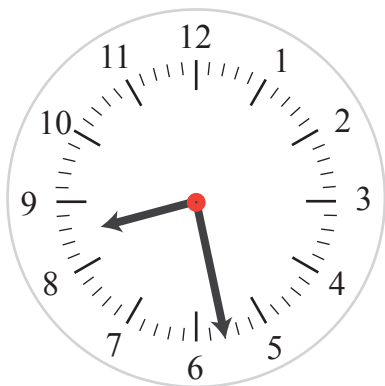


What time is it on the clock? \_\_\_\_\_

What time will it be in 75 minutes? \_\_\_\_\_

What time will it be in 100 minutes? \_\_\_\_\_

What time was it 32 minutes ago? \_\_\_\_\_



What time is it on the clock? \_\_\_\_\_


What time will it be in 47 minutes? \_\_\_\_\_

What time will it be in 123 minutes? \_\_\_\_\_

What time was it 99 minutes ago? \_\_\_\_\_

# Answers

Read the clocks and add or subtract time.

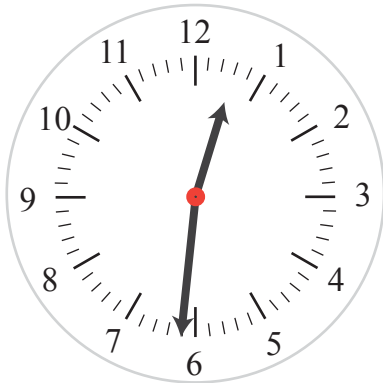


What time is it on the clock? 10.23

What time will it be in 55 minutes? 11.18

What time will it be in 100 minutes? 12.03

What time was it 50 minutes ago? 9.33



What time is it on the clock? 12.31

What time will it be in 90 minutes? 2.01

What time will it be in 125 minutes? 2.36

What time was it 70 minutes ago? 11.21



What time is it on the clock? 3.22

What time will it be in 75 minutes? 4.37

What time will it be in 100 minutes? 5.02

What time was it 32 minutes ago? 2.50



What time is it on the clock? 8.28

What time will it be in 47 minutes? 9.15

What time will it be in 123 minutes? 10.31

What time was it 99 minutes ago? 6.49