


Adding Minutes

Name: _____ Class: _____

Read the clocks and add or subtract time.

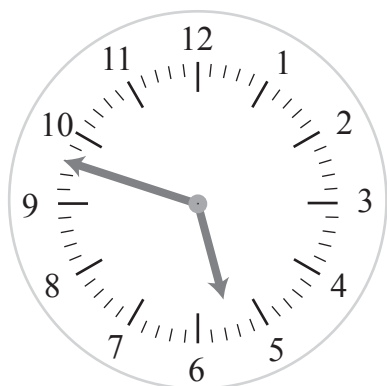


What time is it on the clock? _____

What time will it be in 25 minutes? _____

What time will it be in 90 minutes? _____

What time was it 28 minutes ago? _____

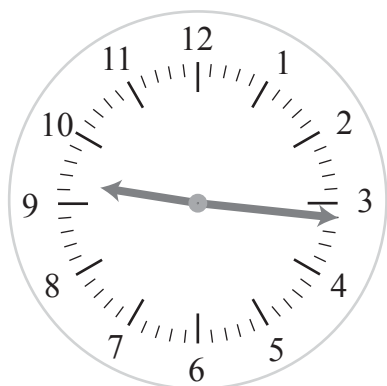


What time is it on the clock? _____

What time will it be in 37 minutes? _____

What time will it be in 115 minutes? _____

What time was it 51 minutes ago? _____




What time is it on the clock? _____

What time will it be in 45 minutes? _____

What time will it be in 90 minutes? _____

What time was it 32 minutes ago? _____



What time is it on the clock? _____

What time will it be in 63 minutes? _____

What time will it be in 160 minutes? _____

What time was it 27 minutes ago? _____

Answers

Read the clocks and add or subtract time.



What time is it on the clock?

9.53

What time will it be in 25 minutes?

10.18

What time will it be in 90 minutes?

11.23

What time was it 28 minutes ago?

9.25



What time is it on the clock?

5.48

What time will it be in 37 minutes?

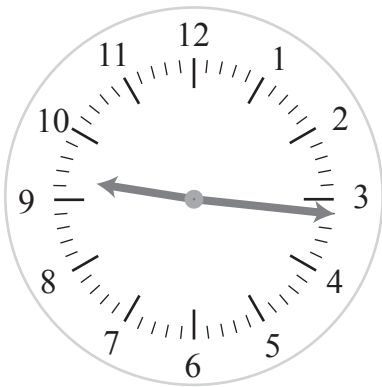
6.25

What time will it be in 115 minutes?

7.43

What time was it 51 minutes ago?

4.57



What time is it on the clock?

9.16

What time will it be in 45 minutes?

10.01

What time will it be in 90 minutes?

10.46

What time was it 32 minutes ago?

8.44



What time is it on the clock?

8.01

What time will it be in 63 minutes?

9.04

What time will it be in 160 minutes?

10.41

What time was it 27 minutes ago?

7.34