

# Comparing Units of Time

Name: \_\_\_\_\_ Class: \_\_\_\_\_

Compare the units of time by using  $>$ ,  $<$  or  $=$

2 h  100 min                      250 min  4 h

4 h  240 min                      325 min  5 h

3 h  190 min                      600 min  11 h

7 h  440 min                      420 min  7 h

6 h  280 min                      400 min  6 h

3 h 10 min  190 min                      250 min  4 h 10 min

4 h 40 min  300 min                      150 min  2 h 20 min

5 h 20 min  300 min                      200 min  3 h 30 min

6 h 30 min  400 min                      100 min  1 h 50 min

8 h 15 min  480 min                      260 min  4 h 20 min

2 h 45 min  165 min                      400 min  6 h 20 min

# Answers

Compare the units of time by using  $>$ ,  $<$  or  $=$

2 h




100 min

250 min



4 h

4 h



240 min

325 min



5 h

3 h



190 min

600 min




11 h

7 h



440 min

420 min



7 h

6 h



280 min

400 min



6 h

3 h 10 min



190 min

250 min



4 h 10 min

4 h 40 min



300 min

150 min



2 h 20 min

5 h 20 min



300 min

200 min



3 h 30 min

6 h 30 min



400 min

100 min




1 h 50 min

8 h 15 min




480 min

260 min



4 h 20 min

2 h 45 min



165 min

400 min



6 h 20 min