

Counting your Marbles


Name: _____ Score: _____

Jenny, Carla and Daisy have a lot of marbles. The following table shows the number of marbles they have. Use the data to complete the pictograph and to answer the questions.

Jenny	Carla	Daisy
60	48	84



1) Complete the pictograph

Jenny	
Carla	
Daisy	

Each  stands for 12 marbles

- Who has most marbles ?
- How many marbles do Carla and Jenny have ?
- How many more marbles does Daisy have than Carla ?
- How many marbles do they have altogether ?
- If Jenny wins half of Daisy's marbles, how many marbles did she win ?

















Answers

Jenny, Carla and Daisy have a lot of marbles. The following table shows the number of marbles they have. Use the data to complete the pictograph and to answer the questions.

Jenny	Carla	Daisy
60	48	84



1) Complete the pictograph

Jenny	    
Carla	   
Daisy	      

Each  stands for 12 marbles

2) Who has most marbles ?

Daisy

3) How many marbles do Carla and Jenny have ?

108 marbles

4) How many more marbles does Daisy have than Carla ?

36 marbles

5) How many marbles do they have altogether ?

192 marbles

6) If Jenny wins half of Daisy's marbles, how many marbles did she win ?

42 marbles