


Duck Eggs

Name: _____ Score: _____

A farmer has 3 egg laying super ducks named Huey, Dewey, and Louie. The farmer counted the number of eggs they layed during a period of 3 months and put this in a data table. Use it to complete the pictograph and to answer the questions.

Huey	Dewey	Louie
60 eggs	96 eggs	84 eggs



1) Complete the pictograph

Jenny	
Carla	
Daisy	


Each  stands for 12 eggs

- Who layed most eggs ?
- How many eggs did Louie and Dewey lay ?
- How many more eggs did Louie lay than Huey?
- How many eggs did the 3 ducks lay altogether?
- If all eggs were sold for 10 cents each, how much did the farmer earn ?




Answers

A farmer has 3 egg laying super ducks named Huey, Dewey, and Louie. The farmer counted the number of eggs they layed during a period of 3 months and put this in a data table. Use it to complete the pictograph and to answer the questions.

Huey	Dewey	Louie
60 eggs	96 eggs	84 eggs



1) Complete the pictograph

Jenny	
Carla	
Daisy	

Each  stands for 12 eggs

2) Who layed most eggs ?

Dewey

3) How many eggs did Louie and Dewey lay ?

180 eggs

4) How many more eggs did Louie lay than Huey?

24 eggs

5) How many eggs did the 3 ducks lay altogether?

240 eggs

6) If all eggs were sold for 10 cents each, how much did the farmer earn ?

24 dollars