





Fruit Punch

Name: _____ Score: _____


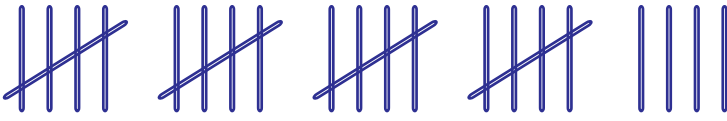

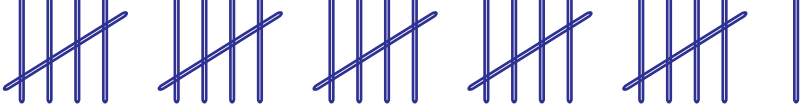

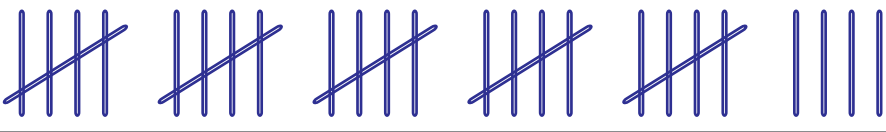


For my birthday party I made a fruit punch. I counted the number of fruits I used and made a tally chart. Use the information to answer the questions.

 apples	
 oranges	
 pears	
 mangos	

- 1) How many apples did I use in my punch ?
- 2) How many oranges did I use in my punch ?
- 3) How many pears and mangos went in my fruit punch ?
- 4) How many fruits did I use altogether ?
- 5) If the mangos cost \$20 per 10, how much did I spend on mangos ?
- 6) I paid \$52 for the oranges. What is the price of 1 orange ?
- 7) I cut each apple in 4 parts. How many apple parts went in the punch ?

Answers

For my birthday party I made a fruit punch. I counted the number of fruits I used and made a tally chart. Use the information to answer the questions.

 apples	
 oranges	
 pears	
 mangos	

1) How many apples did I use in my punch ?

24 apples

2) How many oranges did I use in my punch ?

26 oranges

3) How many pears and mangos went in my fruit punch ?

46 pears and oranges

4) How many fruits did I use altogether ?

97 fruits

5) If the mangos cost \$20 per 10, how much did I spend on mangos ?

\$34

6) I paid \$52 for the oranges. What is the price of 1 orange ?

\$2

7) I cut each apple in 4 parts. How many apple parts went in the punch ?

96 parts