

Place Value Charts

Name: _____ Score: _____

Write the numbers in numerals and expanded form.

Thousands	Hundreds	Tens	Ones

Thousands	Hundreds	Tens	Ones

Thousands	Hundreds	Tens	Ones

Thousands	Hundreds	Tens	Ones

Thousands	Hundreds	Tens	Ones

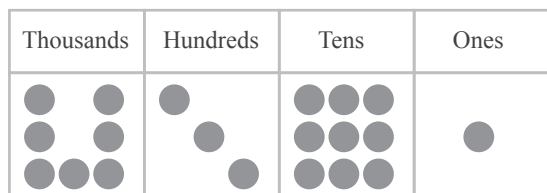
Thousands	Hundreds	Tens	Ones

Thousands	Hundreds	Tens	Ones

Thousands	Hundreds	Tens	Ones

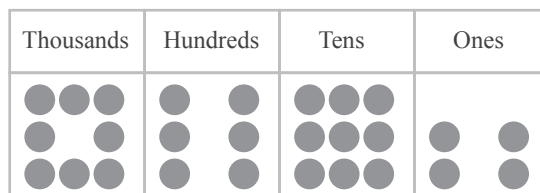
Answers

Write the numbers in numerals and expanded form.



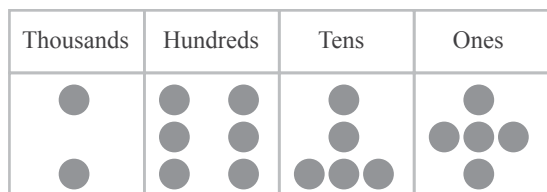
7,391

7,000 + 300 + 90 + 1



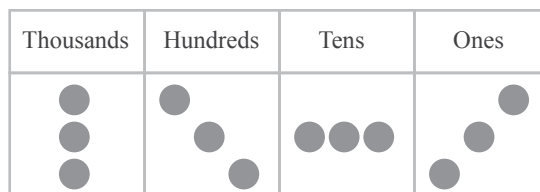
8,694

8,000 + 600 + 90 + 4



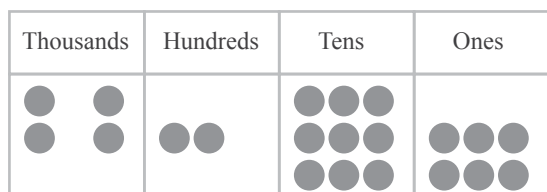
2,655

2,000 + 600 + 50 + 5



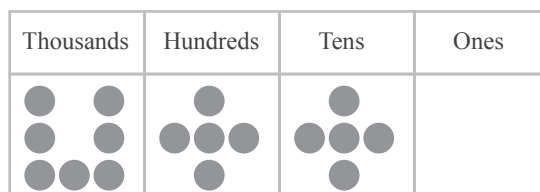
3,333

3,000 + 300 + 30 + 3




4,296

4,000 + 200 + 90 + 6



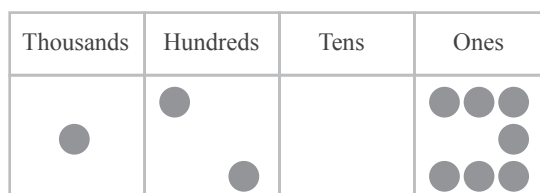
7,550

7,000 + 500 + 50



9,088

9,000 + 80 + 8



1,207

1,000 + 200 + 7