
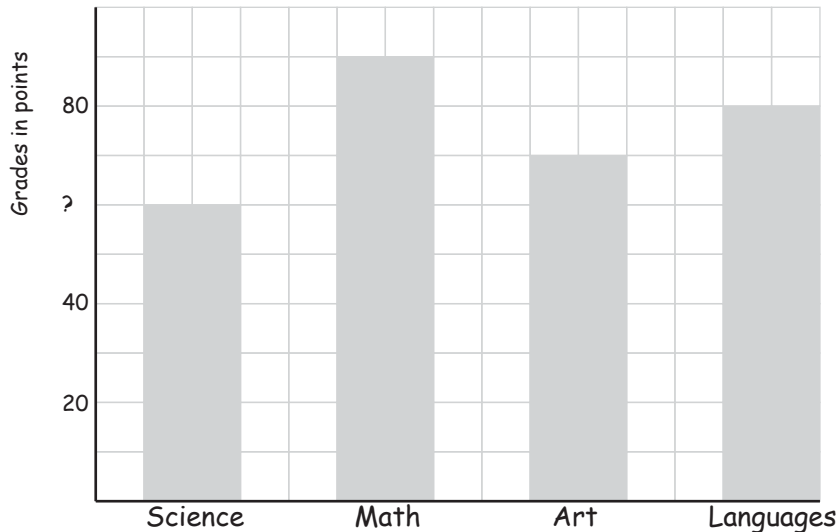


School Grades

Name: _____ Score: _____

The following bar graph shows the grades I got on the mid-term test of some of my school subjects. Use the data to answer the questions.




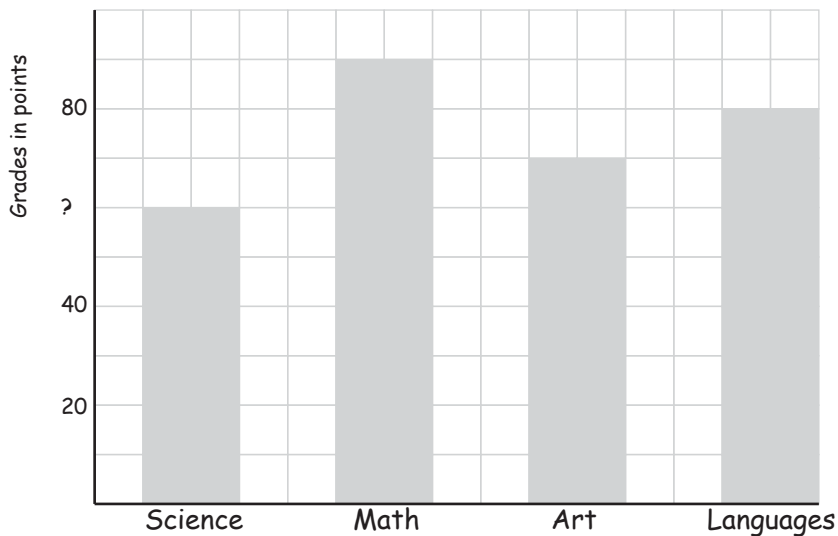
1) Complete the score table

Science	
Math	90 points
Art	
Languages	

- 2) What is the difference between the highest and lowest score?
- 3) On which subject did I get 6 times 15 points?
- 4) How many more points did I get for Art than on Science?
- 5) With 100 being a full score, how many points did I lose on Science?
- 6) How many points did I lose on all 4 subjects?

Answers

The following bar graph shows the grades I got on the mid-term test of some of my school subjects. Use the data to answer the questions.



- 1) Complete the score table

Science	60 points
Math	90 points
Art	70 points
Languages	80 points

- 2) What is the difference between the highest and lowest score?

30 points

- 3) On which subject did I get 6 times 15 points?

On Math

- 4) How many more points did I get for Art than on Science?

10 points

- 5) With 100 being a full score, how many points did I lose on Science?

40 points

- 6) How many points did I lose on all 4 subjects?

100 points