


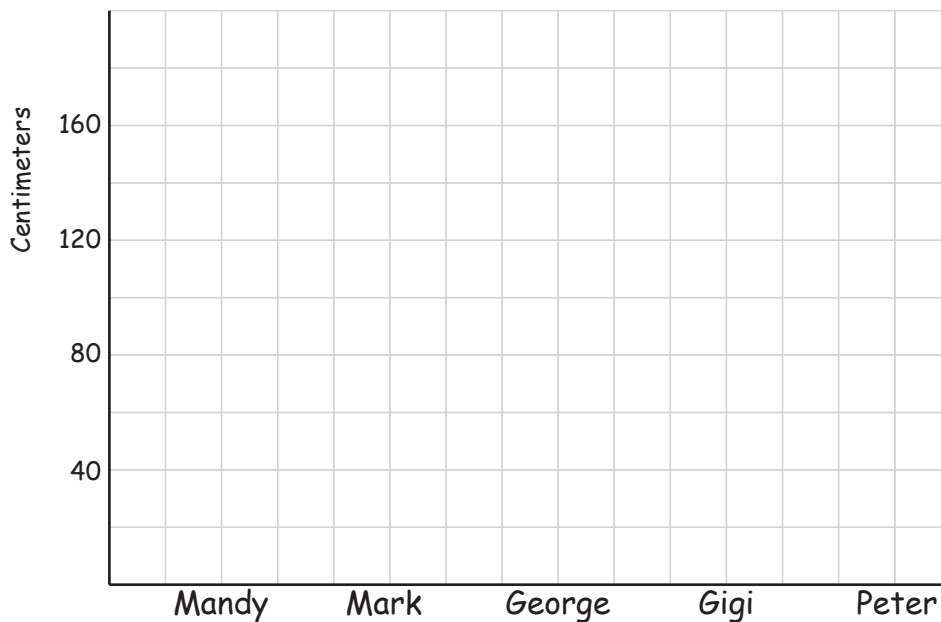
How tall are you?

Name: _____ Score: _____

The following data table shows how tall some of my friends are in centimeters. Use the data to complete the graph and answer the questions.

Mandy	Mark	George	Gigi	Peter
140 cm	170 cm	160 cm	130 cm	150 cm

1) Complete the bar graph




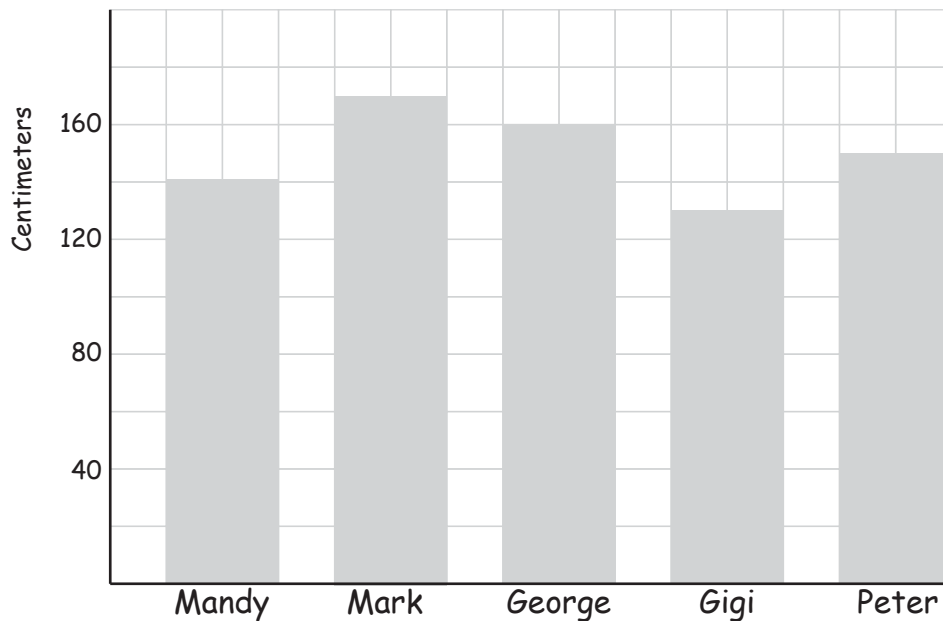
- 2) Who is 30 cm taller than Gigi?
- 3) Who is 4 times 35 centimeters tall?
- 4) Who is shorter than Peter but taller than Gigi?
- 5) What is the total height of the 5 friends?
- 6) What's the difference in cm between the tallest and the shortest?

Answers

The following data table shows how tall some of my friends are in centimeters. Use the data to complete the graph and answer the questions.

Mandy	Mark	George	Gigi	Peter
140 cm	170 cm	160 cm	130 cm	150 cm

- 1) Complete the bar graph



- 2) Who is 30 cm taller than Gigi?

George

- 3) Who is 4 times 35 centimeters tall?

Mandy

- 4) Who is shorter than Peter but taller than Gigi?

Mandy

- 5) What is the total height of the 5 friends?

750 centimeters

- 6) What's the difference in cm between the tallest and the shortest?

40 centimeters