

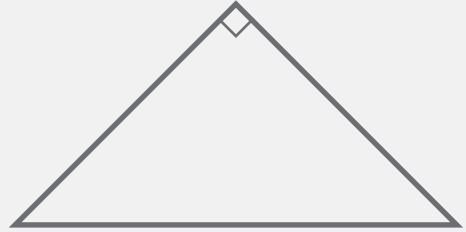
# 2D Shapes

Name: \_\_\_\_\_ Class: \_\_\_\_\_

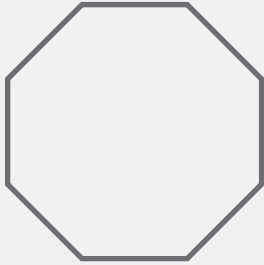
Name each shape and write down the number of sides and right angles.



Name: \_\_\_\_\_  
Sides: \_\_\_\_\_  
Right Angles: \_\_\_\_\_



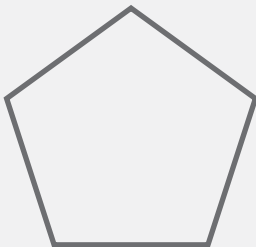
Name: \_\_\_\_\_  
Sides: \_\_\_\_\_  
Right Angles: \_\_\_\_\_



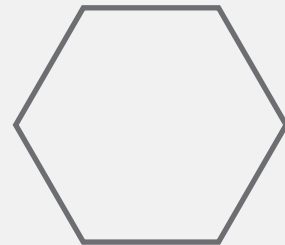
Name: \_\_\_\_\_  
Sides: \_\_\_\_\_  
Right Angles: \_\_\_\_\_



Name: \_\_\_\_\_  
Sides: \_\_\_\_\_  
Right Angles: \_\_\_\_\_



Name: \_\_\_\_\_  
Sides: \_\_\_\_\_  
Right Angles: \_\_\_\_\_



Name: \_\_\_\_\_  
Sides: \_\_\_\_\_  
Right Angles: \_\_\_\_\_

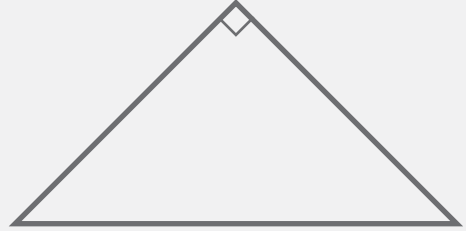
# Answers



Name: rectangle

Sides: 4

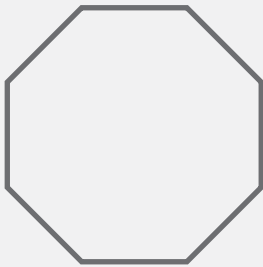
Right Angles: 4



Name: right triangle

Sides: 3

Right Angles: 1



Name: octagon

Sides: 8

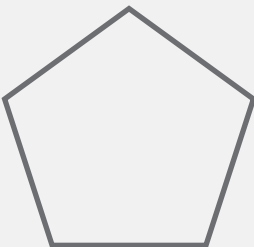
Right Angles: 0



Name: square

Sides: 4

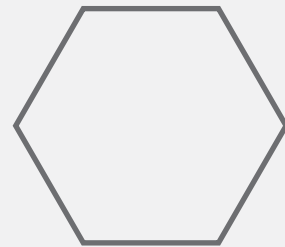
Right Angles: 4



Name: pentagon

Sides: 5

Right Angles: 0



Name: hexagon

Sides: 6

Right Angles: 0