


# Sides and Angles

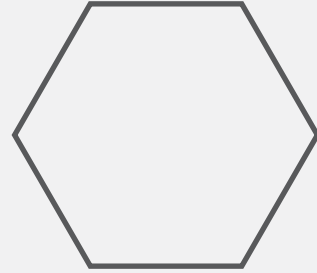
Name: \_\_\_\_\_ Class: \_\_\_\_\_

Name each and write down its number of sides and angles.



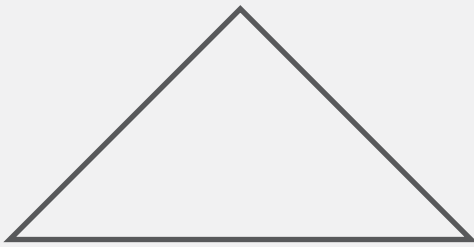
Name: \_\_\_\_\_

Sides: \_\_\_\_\_ Angles: \_\_\_\_\_



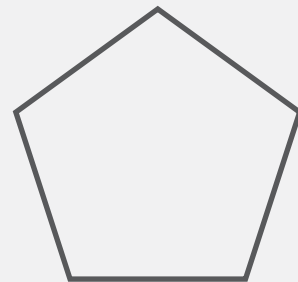
Name: \_\_\_\_\_

Sides: \_\_\_\_\_ Angles: \_\_\_\_\_




Name: \_\_\_\_\_

Sides: \_\_\_\_\_ Angles: \_\_\_\_\_



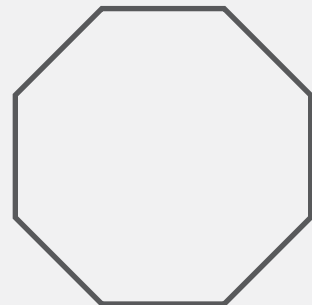
Name: \_\_\_\_\_

Sides: \_\_\_\_\_ Angles: \_\_\_\_\_



Name: \_\_\_\_\_

Sides: \_\_\_\_\_ Angles: \_\_\_\_\_




Name: \_\_\_\_\_

Sides: \_\_\_\_\_ Angles: \_\_\_\_\_

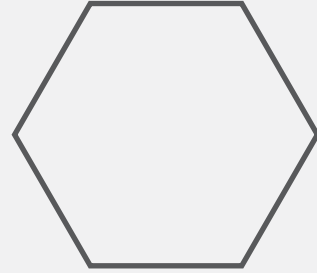
# Answers

Name each and write down its number of sides and angles.



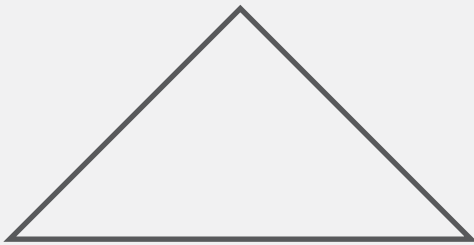
Name: square

Sides: 4 Angles: 4



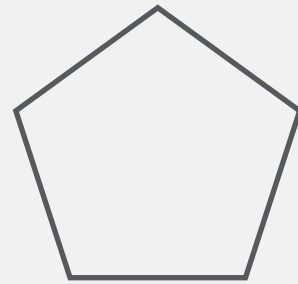
Name: hexagon

Sides: 6 Angles: 6



Name: triangle

Sides: 3 Angles: 3



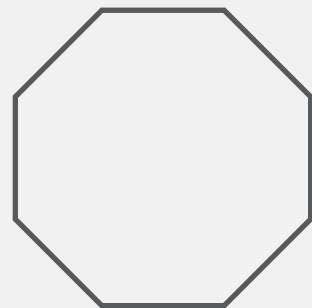
Name: pentagon

Sides: 5 Angles: 5



Name: rectangle

Sides: 4 Angles: 4



Name: octagon

Sides: 8 Angles: 8