


12 and 24 hour Clock

Name: _____ Class: _____

Write down all possible times using the 12 and 24 hour clock.




12 hour clock

10.05 AM

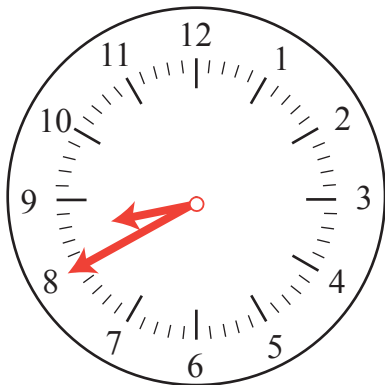
24 hour clock

10.05 PM



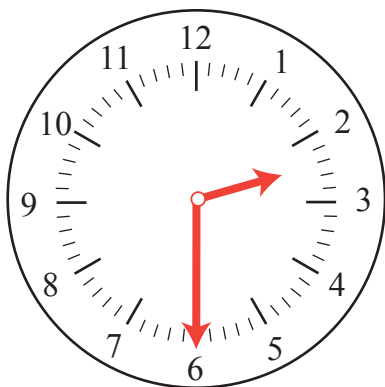
12 hour clock

24 hour clock



12 hour clock

24 hour clock




12 hour clock

24 hour clock

Answers

Write down all possible times using the 12 and 24 hour clock.



12 hour clock

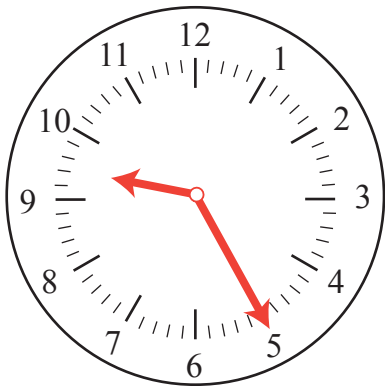
10.05 AM

10.05 PM

24 hour clock

10.05 AM

22.05 PM



12 hour clock

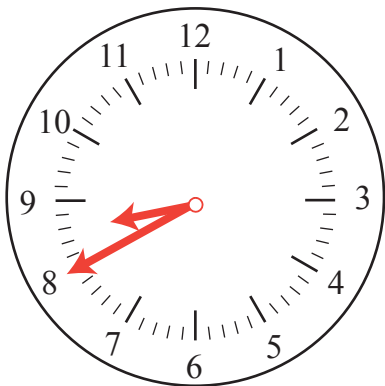
09.25 AM

09.25 PM

24 hour clock

09.25 AM

21.25 PM



12 hour clock

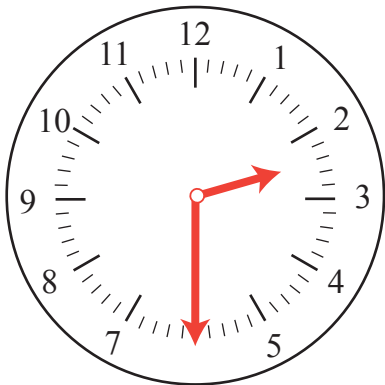
08.40 AM

08.40 PM

24 hour clock

08.40 AM

20.40 PM



12 hour clock

02.30 AM

02.30 PM

24 hour clock

02.30 AM

14.30 PM