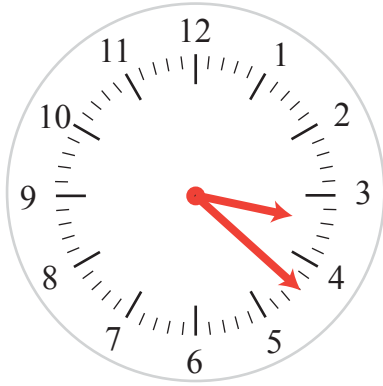


12 and 24 hour Clock

Name: _____ Class: _____

Write down all possible times using the 12 and 24 hour clock.

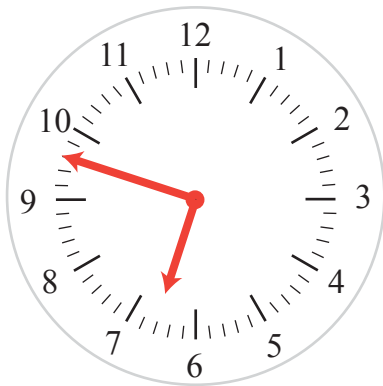


12 hour clock

03.22 AM

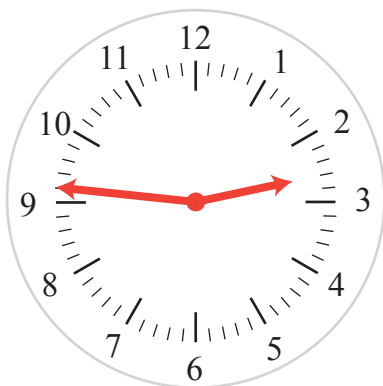
03.22 PM

24 hour clock



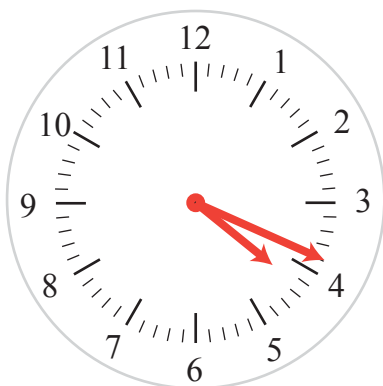
12 hour clock

24 hour clock



12 hour clock

24 hour clock

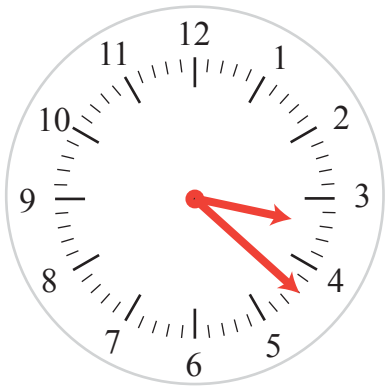


12 hour clock

24 hour clock

Answers

Write down all possible times using the 12 and 24 hour clock.



12 hour clock

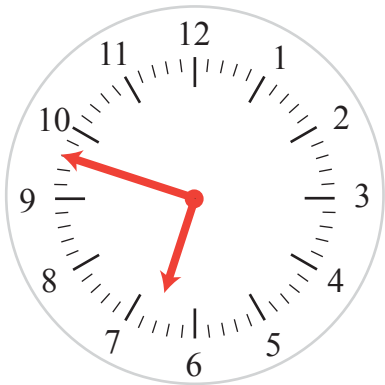
03.22 AM

03.22 PM

24 hour clock

03.22 AM

15.22 PM



12 hour clock

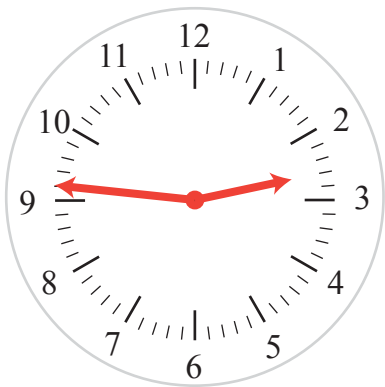
06.48 AM

06.48 PM

24 hour clock

06.48 AM

18.48 PM



12 hour clock

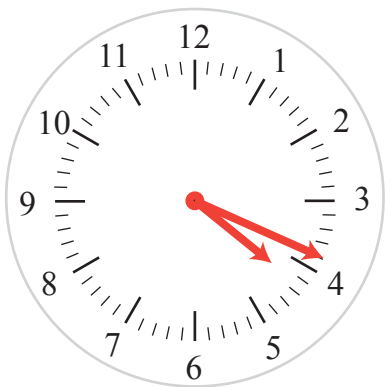
02.46 AM

02.46 PM

24 hour clock

02.46 AM

14.46 PM



12 hour clock

04.19 AM

04.19 PM

24 hour clock

04.19 AM

16.19 PM