

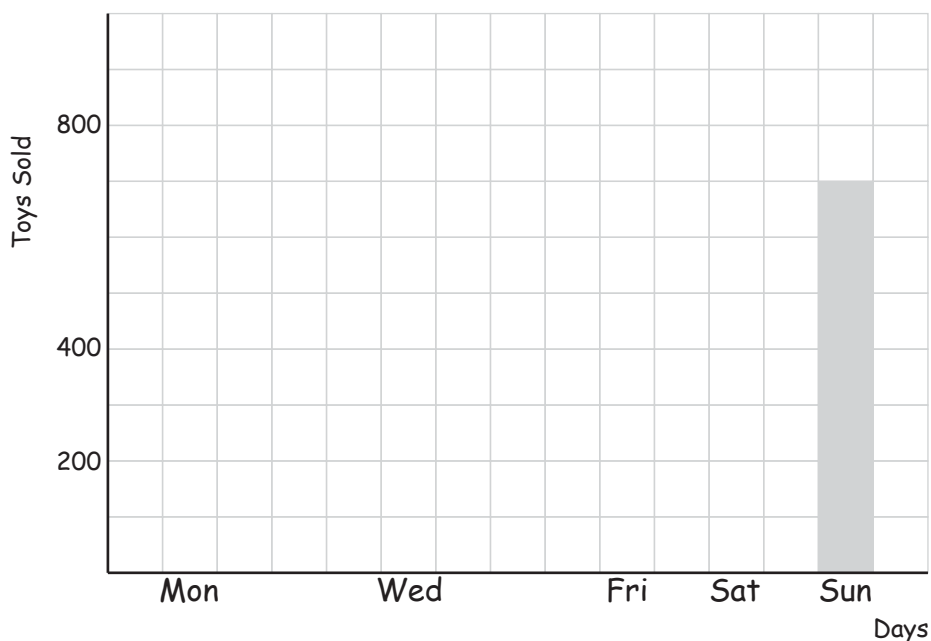
# Complete the Bar Graphs

Name: \_\_\_\_\_ Score: \_\_\_\_\_

Use the data tables to complete the bar graphs, including the labels and scales.  
For the 1st graph round off to the nearest 100 for the 2nd graph the nearest 10 .

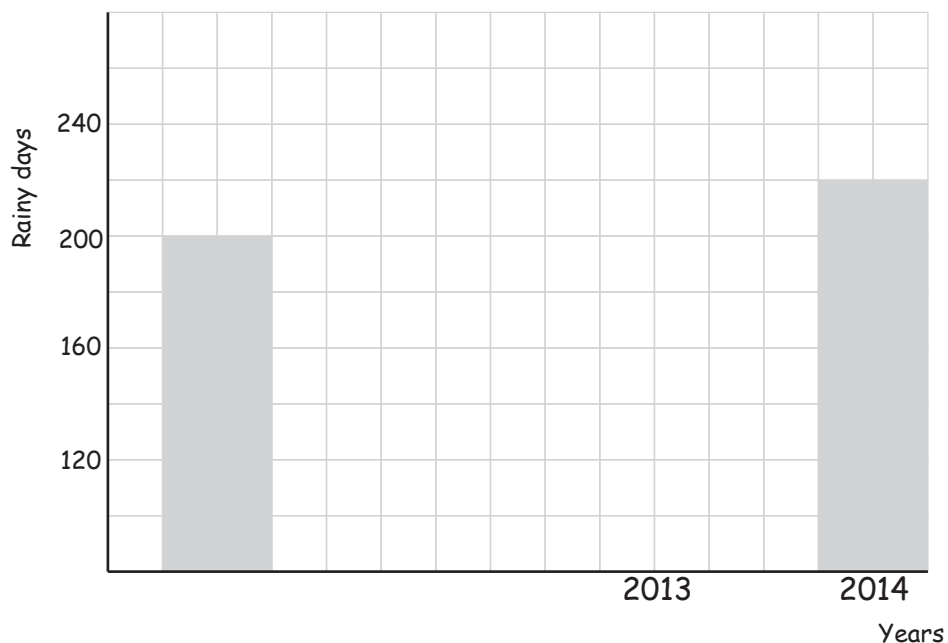
1) Number of toys sold by a toy shop

Mon	Tue	Wed	Thu	Fri	Sat	Sun
633 toys	912 toys	556 toys	701 toys	290 toys	575 toys	749 toys



2) Rainy days per year in England

2011	2012	2013	2014
203 days	238 days	184 days	215 days

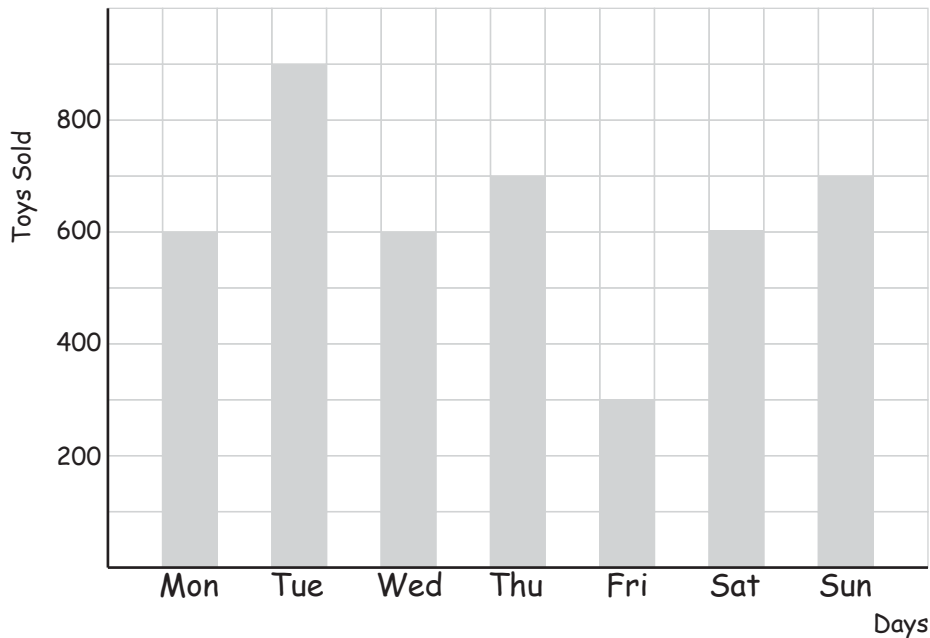


# Answers

Use the data tables to complete the bar graphs, including the labels and scales.  
For the 1st graph round off to the nearest 100 for the 2nd graph the nearest 10 .

1) Number of toys sold by a toy shop

Mon	Tue	Wed	Thu	Fri	Sat	Sun
633 toys	912 toys	556 toys	701 toys	290 toys	575 toys	749 toys



2) Rainy days per year in England

2011	2012	2013	2014
203 days	238 days	184 days	215 days

