

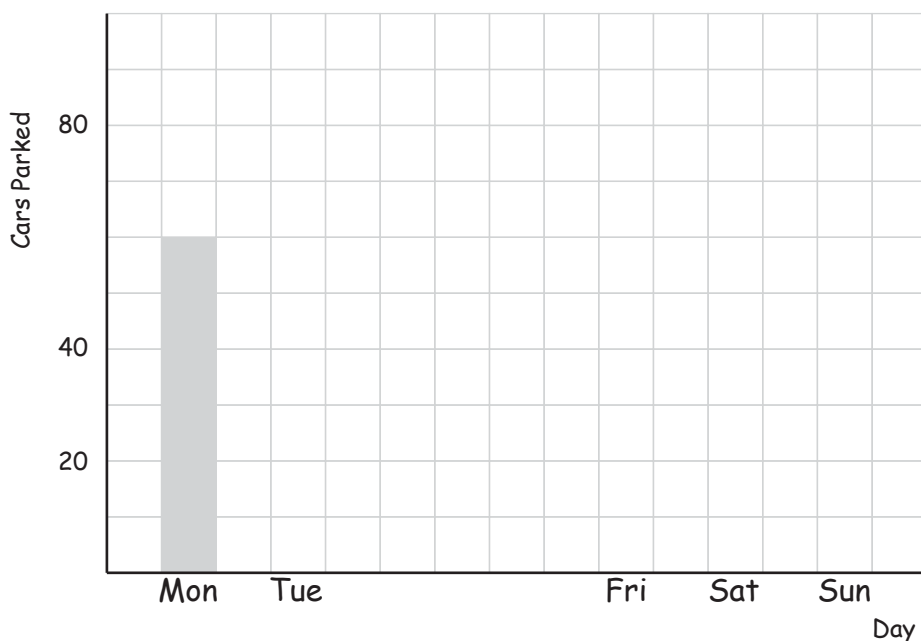
Complete the Bar Graphs

Name: _____ Score: _____

Use the data tables to complete the bar graphs, including the labels and scales.
For the 1st graph round off to the nearest 10 for the 2nd graph the nearest 100 .

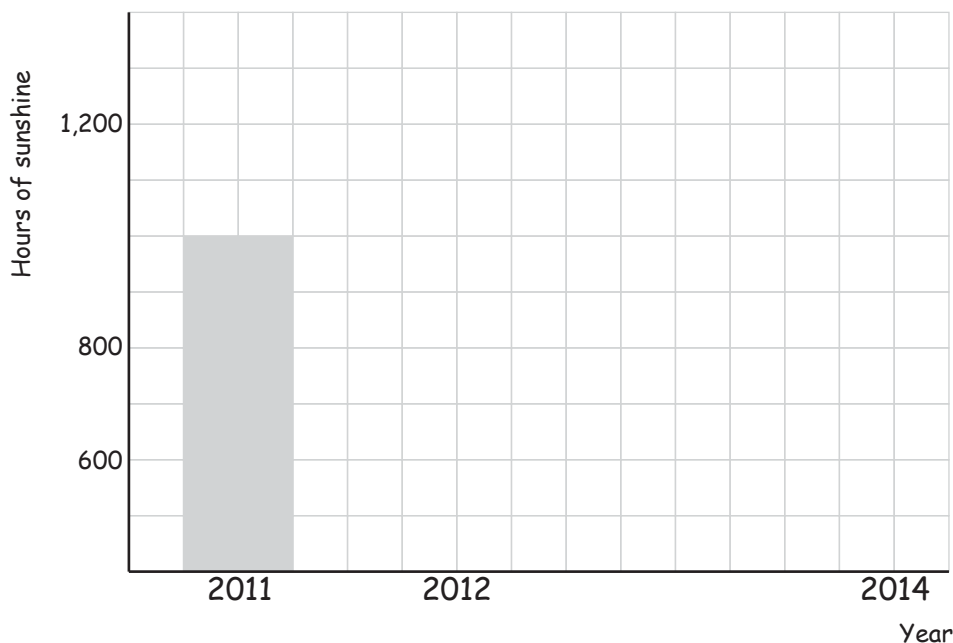
1) Number of cars parked in my street

Mon	Tue	Wed	Thu	Fri	Sat	Sun
62 cars	47 cars	18 cars	83 cars	12 cars	76 cars	51 cars



2) Hours of sunshine per year

2011	2012	2013	2014
970 hours	680 hours	1,150 hours	1,270 hours

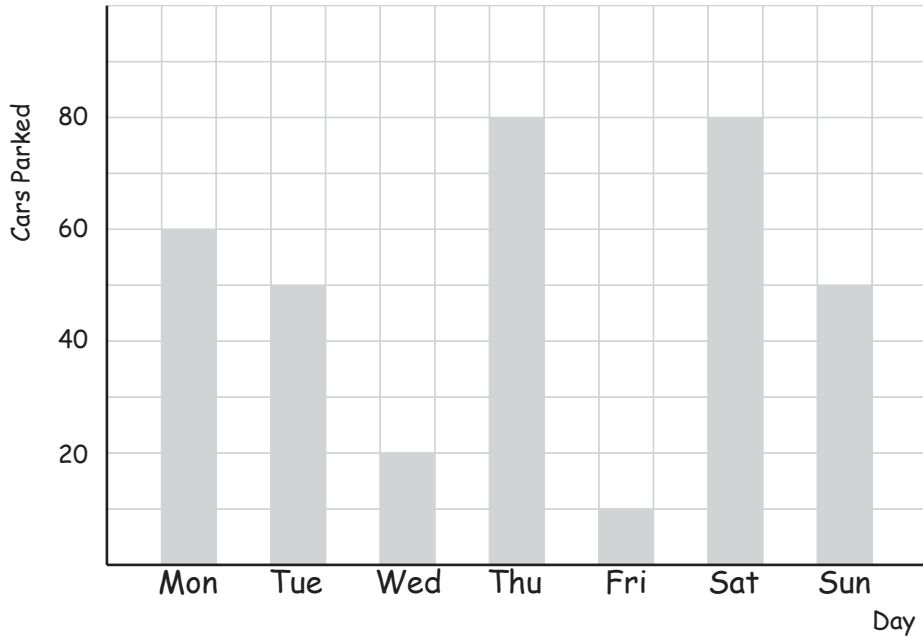


Answers

Use the data tables to complete the bar graphs, including the labels and scales.
For the 1st graph round off to the nearest 10 for the 2nd graph the nearest 100 .

1) Number of cars parked in my street

Mon	Tue	Wed	Thu	Fri	Sat	Sun
62 cars	47 cars	18 cars	83 cars	12 cars	76 cars	51 cars



2) Hours of sunshine per year

2011	2012	2013	2014
970 hours	680 hours	1,150 hours	1,270 hours

