

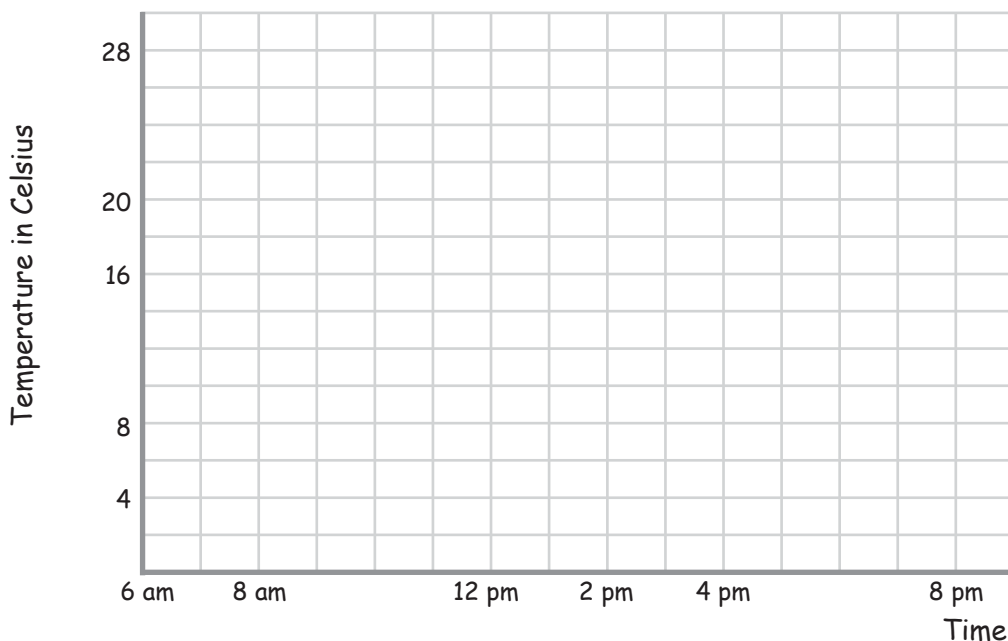
Complete the Line Graphs

Name: _____ Score: _____

Use the data tables to complete the line graphs, including the labels and scales.
For the second graph you need to round the data off to the nearest ten.

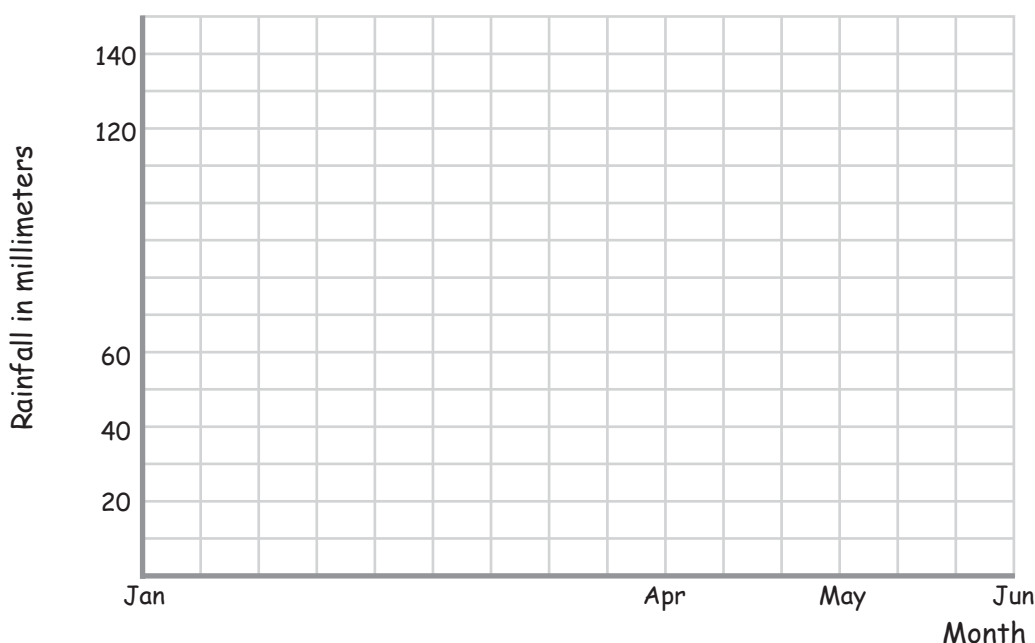
1) Temperatures in Celcius during a day

10 C	12 C	16 C	18 C	22 C	28 C	24 C	18 C
6 am	8 am	10 am	12 pm	2 pm	4 pm	6 pm	8 pm



2) Rainfall per month in millimeters

134 mm	89 mm	127 mm	103 mm	55 mm	76 mm
Jan	Feb	Mar	Apr	May	Jun

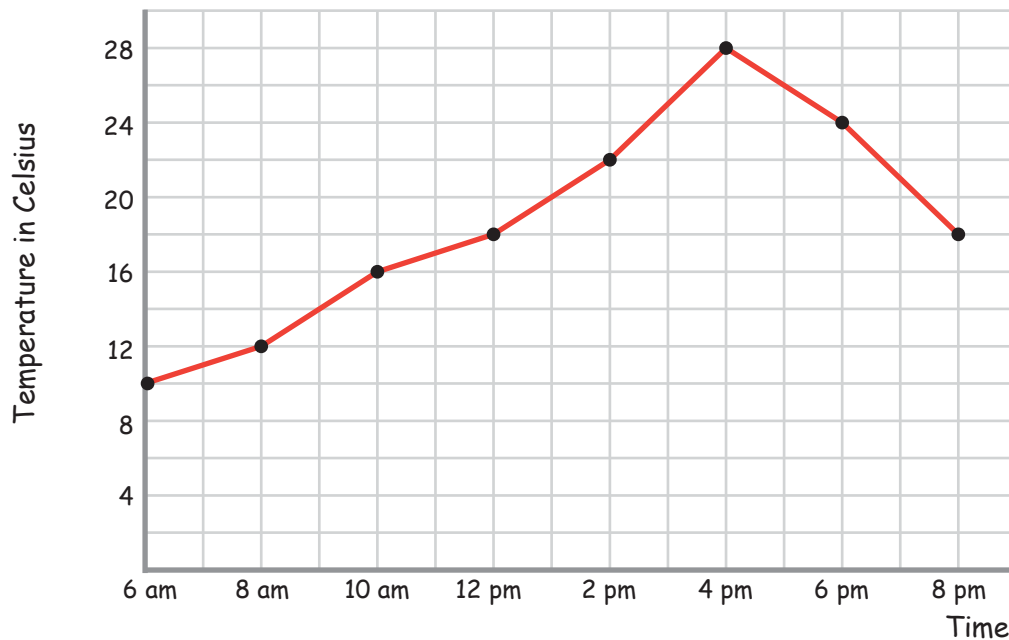


Answers

Use the data tables to complete the line graphs, including the labels and scales.
For the second graph you need to round the data off to the nearest ten.

1) Temperatures in Celcius during a day

10 C	12 C	16 C	18 C	22 C	28 C	24 C	18 C
6 am	8 am	10 am	12 pm	2 pm	4 pm	6 pm	8 pm



2) Rainfall per month in millimeters

134 mm	89 mm	127 mm	103 mm	55 mm	76 mm
Jan	Feb	Mar	Apr	May	Jun

