

# Complete the Line Graphs

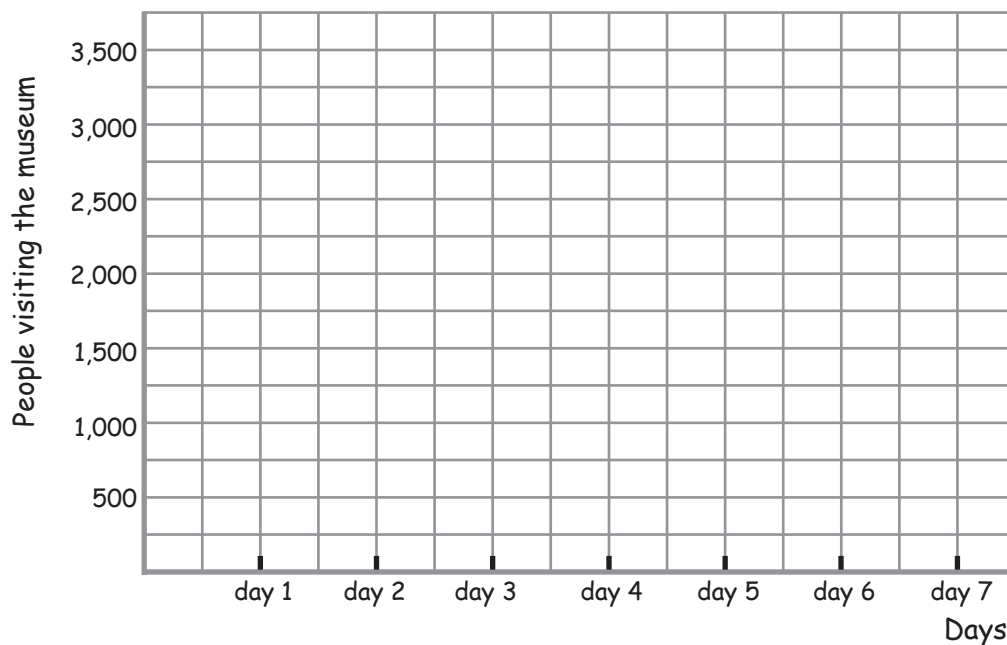
Name: \_\_\_\_\_ Score: \_\_\_\_\_

Use the data tables to complete the line graphs, including the labels and scales.  
Round the data in the tables off to the nearest hundred first.

1) People visiting the museum per day

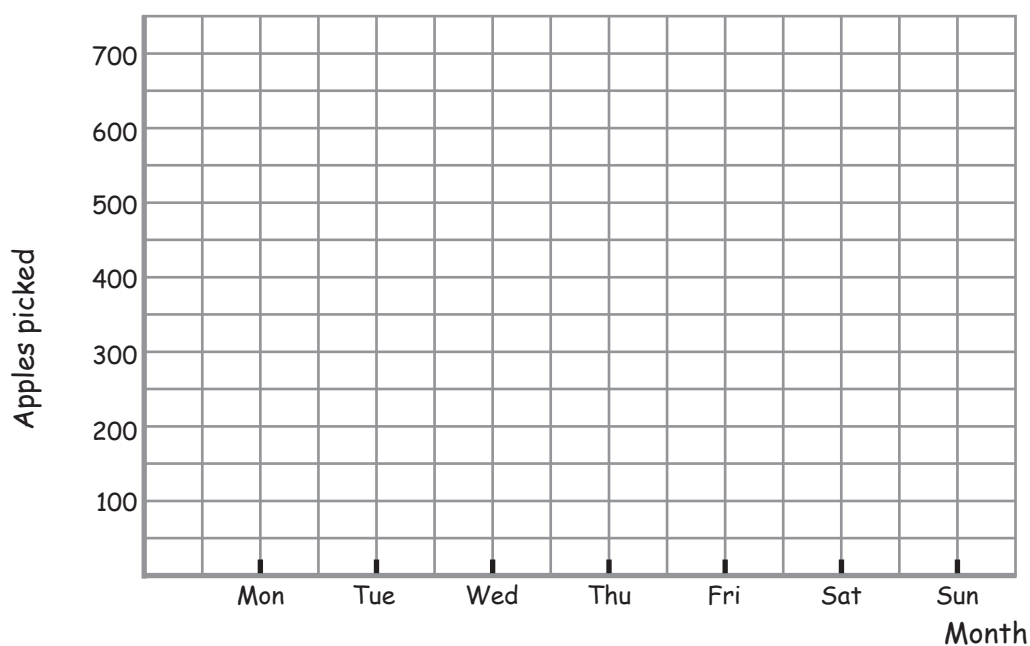


day 1	day 2	day 3	day 4	day 5	day 6	day 7
1,000	500	2,000	1,500	3,000	1,000	2,500



2) Apples picked per day

200	250	600	300	450	350	650
Mon	Tue	Wed	Thu	Fri	Sat	Sun



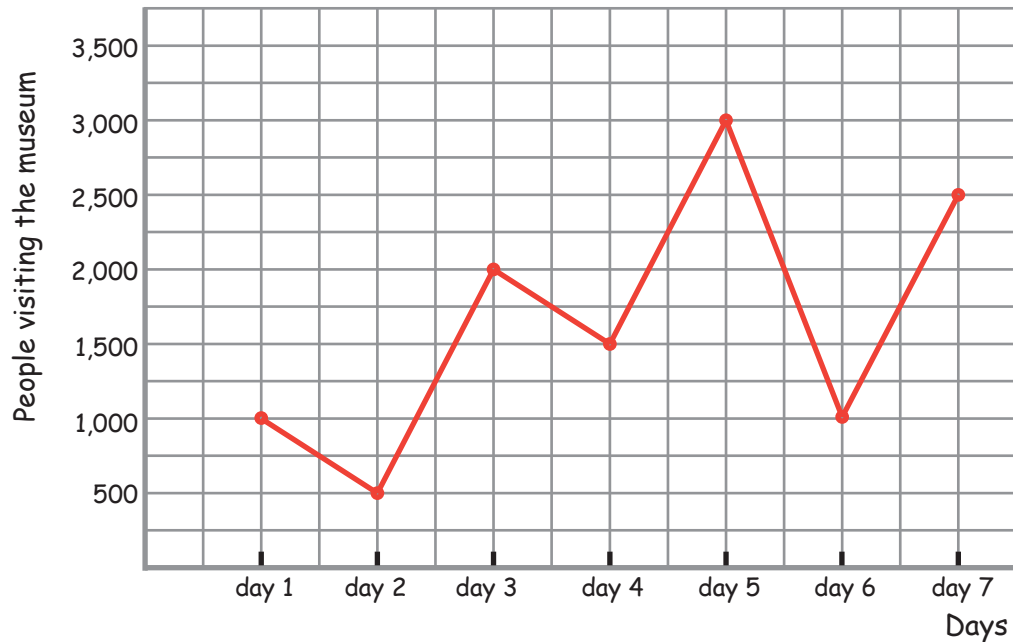
# Answers

Use the data tables to complete the line graphs, including the labels and scales. Round the data in the tables off to the nearest hundred first.

## 1) People visiting the museum per day



day 1	day 2	day 3	day 4	day 5	day 6	day 7
1,000	500	2,000	1,500	3,000	1,000	2,500



## 2) Apples picked per day

200	250	600	300	450	350	650
Mon	Tue	Wed	Thu	Fri	Sat	Sun

